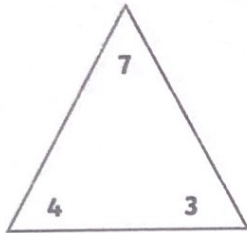
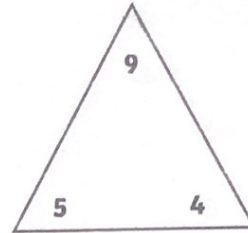


# Addition and Subtraction Fact Families to 10

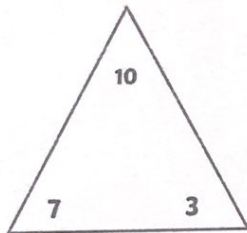
For each set of numbers, write four different addition and subtraction facts.



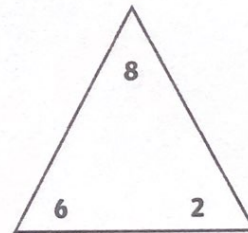
$$\begin{array}{r} \square + \square = \square \\ \square + \square = \square \\ \square - \square = \square \\ \square - \square = \square \end{array}$$



$$\begin{array}{r} \square + \square = \square \\ \square + \square = \square \\ \square - \square = \square \\ \square - \square = \square \end{array}$$



$$\begin{array}{r} \square + \square = \square \\ \square + \square = \square \\ \square - \square = \square \\ \square - \square = \square \end{array}$$



$$\begin{array}{r} \square + \square = \square \\ \square + \square = \square \\ \square - \square = \square \\ \square - \square = \square \end{array}$$

