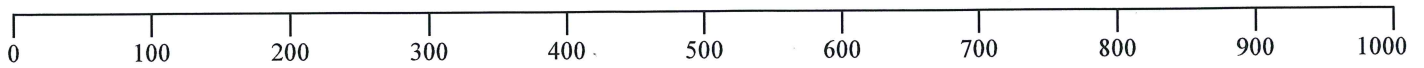
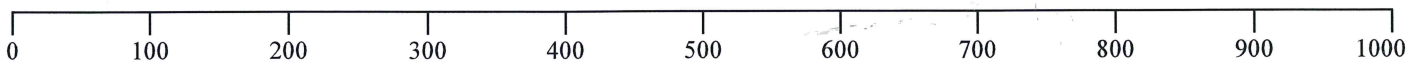


- Round the following to the nearest 100.



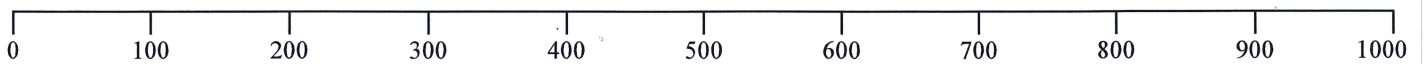
16. 926 → 900	21. 688 →	26. 101 →
17. 619 →	22. 416 →	27. 474 →
18. 860 →	23. 399 →	28. 831 →
19. 571 →	24. 435 →	29. 759 →
20. 545 →	25. 289 →	30. 104 →

- Round the following to the nearest 100.



16. 926 → 900	21. 993 →	26. 112 →
17. 825 →	22. 816 →	27. 760 →
18. 461 →	23. 161 →	28. 840 →
19. 510 →	24. 635 →	29. 554 →
20. 541 →	25. 177 →	30. 450 →

- Round the following to the nearest 100.



16. 926 → 900	21. 426 →	26. 937 →
17. 245 →	22. 781 →	27. 164 →
18. 969 →	23. 120 →	28. 224 →
19. 208 →	24. 76 →	29. 583 →
20. 736 →	25. 190 →	30. 650 →