













Round to the Nearest 10

1. 31 → _____  A horizontal number line with tick marks at 30 and 40. The number 31 is marked on the line between 30 and 40.
2. 49 → _____  A horizontal number line with tick marks at 40 and 50. The number 49 is marked on the line between 40 and 50.
3. 73 → _____  A horizontal number line with tick marks at 70 and 80. The number 73 is marked on the line between 70 and 80.
4. 89 → _____  A horizontal number line with tick marks at 80 and 90. The number 89 is marked on the line between 80 and 90.
5. 64 → _____  A horizontal number line with tick marks at 60 and 70. The number 64 is marked on the line between 60 and 70.
6. 11 → _____  A horizontal number line with tick marks at 10 and 20. The number 11 is marked on the line between 10 and 20.
7. 25 → _____  A horizontal number line with tick marks at 20 and 30. The number 25 is marked on the line between 20 and 30.
8. 42 → _____  A horizontal number line with tick marks at 40 and 50. The number 42 is marked on the line between 40 and 50.
9. 97 → _____  A horizontal number line with tick marks at 90 and 100. The number 97 is marked on the line between 90 and 100.
10. 53 → _____  A horizontal number line with tick marks at 50 and 60. The number 53 is marked on the line between 50 and 60.
11. 75 → _____  A horizontal number line with tick marks at 70 and 80. The number 75 is marked on the line between 70 and 80.
12. 58 → _____  A horizontal number line with tick marks at 50 and 60. The number 58 is marked on the line between 50 and 60.