




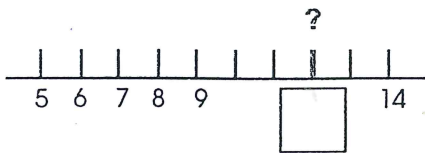
Test 18

1. Who has more than Roop?



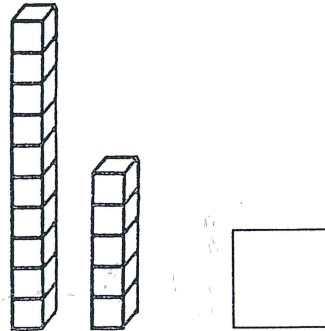
2. Who has less than Roop?

3. Fill in the number.



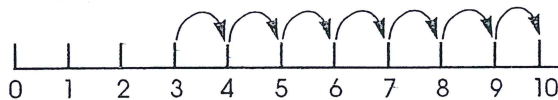
4.

How many cubes?

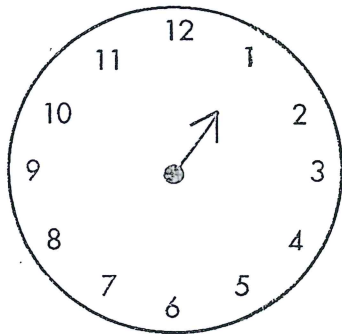


5.

$3 + 7 = \square$

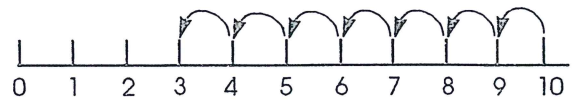


6. Draw 1 o'clock.



7.

$10 - 7 = \square$



8. 





15

=

10

+

9. Who has the most?



10. Who has the least?

