



Test 21



1.




$$3 + 0 = \square$$

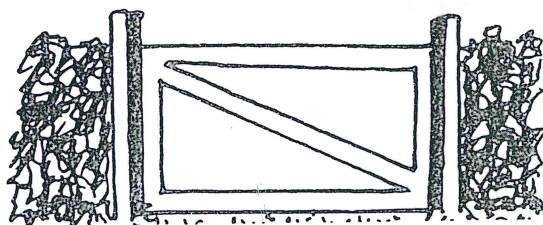
2.

$$0 + \square = 4$$

3. How many cubes?



4. Shade the triangles.

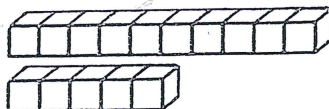


5.



10

+

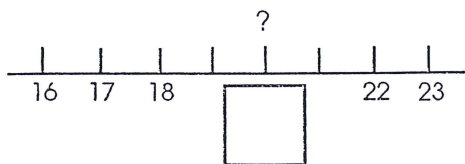


15

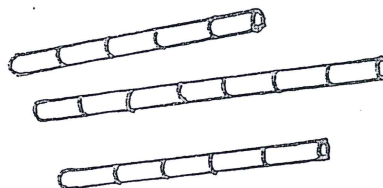
=

t	u
<input type="text"/>	<input type="text"/>

6. Fill in the number.



7. Shade the bars that are the same length.



8.



18

=




+



8

9. Who has the least?



10. Who has the most?

