



Line Up the Vehicles




A toy car is 4 centimetres long and a toy bicycle is 2 centimetres long. Jude likes to line them up one in front of the other.

 How many toys can he line up on his mat that is 36 centimetres long?

 How many could he use stretching 20 centimetres across his desk?



Going Further

 How long would the mat have to be if Jude used 10 cars and 10 bicycles?