

Test 15

1. Fill in the missing numbers.

1, 3, 5, , , , 13

2. Julie ate 5 chocolates and had 8 left.

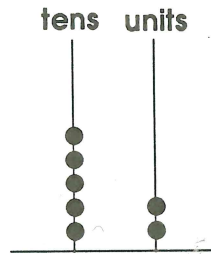
How many did she have at the start?

3.

Five stools have legs.



4.



=


5.

Fill in the missing numbers.



6.

Shade $\frac{1}{2}$ of this letter.



7.


Shade three boxes that add up to 5.



8.

8:05

is minutes past o'clock.



9. Fill in the missing numbers.

12, 14, , , , 22

10.

- 1 = 4