




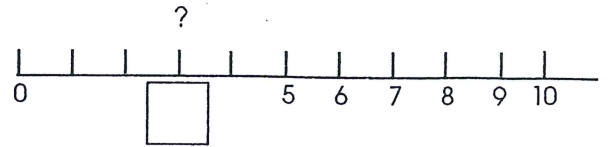
Test 17

1.

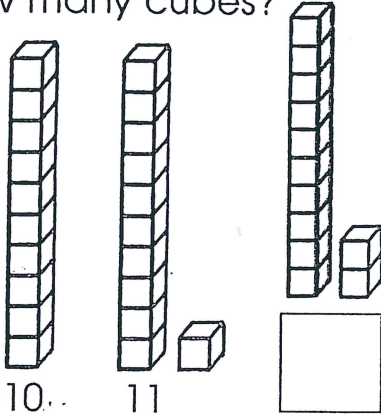


Draw 4 o'clock.


2. Fill in the number.



3. How many cubes?



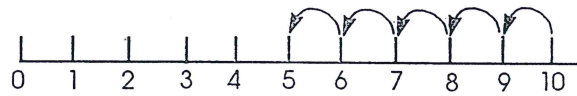
4.



Draw 7 o'clock.


5. Take five from ten.

$$10 - 5 = \square$$



6.

Draw a ring around $\frac{1}{2}$ of the boats.



7.



$$12 = 10 + 2$$



$$13 = 10 + \square$$

8.

Fill in the missing numbers.

12, 13, \square , \square , 16

9.

$$4 + 6 = \square$$

10.

$$5 + \square = 10$$

