


Test 14

1.



is

2.


Count on in 3s.
Write the numbers.

12	15			24		
----	----	--	--	----	--	--

3.

Which set has $\frac{1}{2}$ shaded?

(a)



(b)

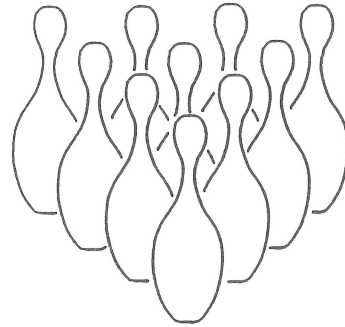


(c)



4.

10 pins are standing.
If 8 are knocked down how many will be left standing?



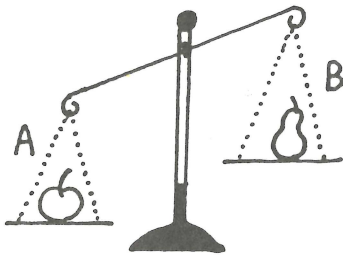
5.



Four stools have legs.


6.

Which is heavier?



7.

Shade $\frac{1}{2}$ of this set.



8. Fill in the missing numbers.



9.

10 less than 80 =

10.

- 5 = 5

