

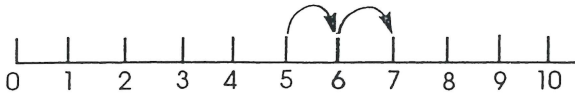


# Test 16

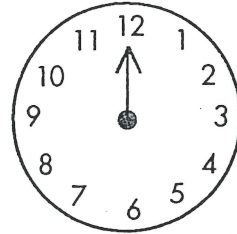


1.

$$5 + \square = 7$$



2.



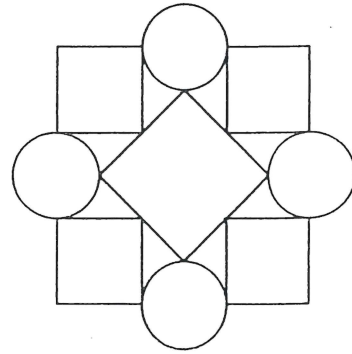
Draw 6 o'clock.

3. Is this correct? Draw a ring around yes or no.

$$16 > 14$$

Yes      No

4. Shade the squares.



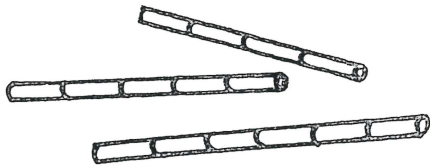
5.

Draw a loop around 18.

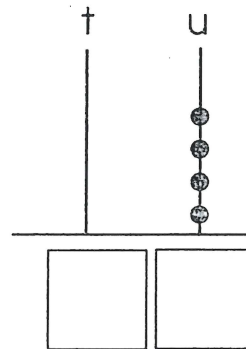


6.

Shade the longest bar.

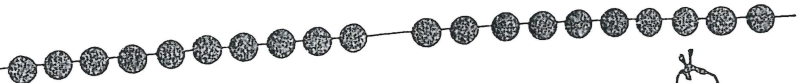


7.



8.

Draw a loop around 19.



9.

$$3 + 4 = \square$$

10.

$$3 + \square = 7$$

