


Test 13

1.

$$\frac{1}{2} \text{ of } 10 = \square$$


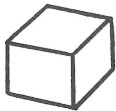
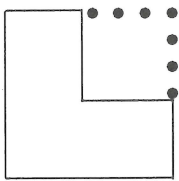
2.



is


:	:
---	---

3. Shade the piece that fits in the space.



4.

Saqib ate 4 chocolates and had 9 left. How many did he have at the start?



chocolates

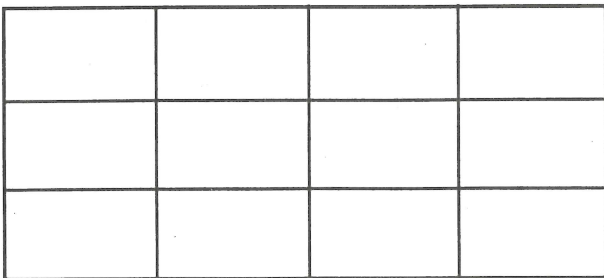
5.

Shade three boxes that add up to 3.

1	2	0	1	3
---	---	---	---	---

6.

Shade $\frac{1}{2}$ of this shape.



7.

Count on in 3s. Write the numbers.

0	3				15
---	---	--	--	--	----

8.

5 minutes past 10 o'clock

:	:
---	---

9.

$$\square - 4 = 9$$

10.

$$5 - 3 = \square$$

