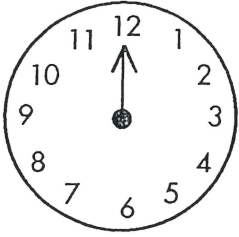




Test 15



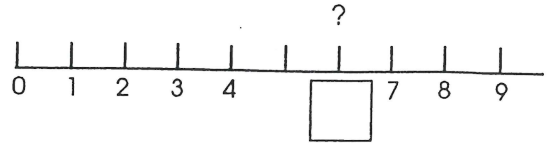
1.



Draw 3 o'clock.

2.

Fill in the number.



3.

4 less than 9 is



4.

Is this correct? Draw a ring around yes or no.

$$12 > 13$$

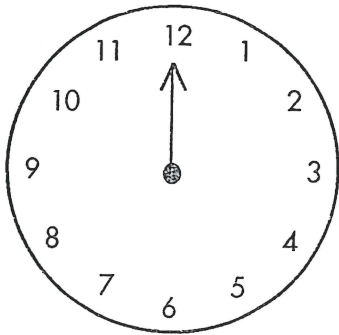
Yes No

5.

Draw a ring around 15.



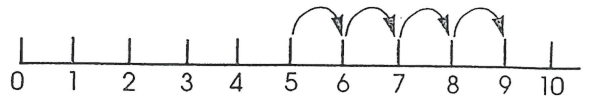
6.



Draw nine o'clock.

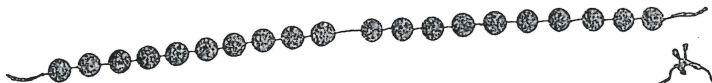
7.

$$5 + \square = 9$$



8.

Draw a loop around 16.



9. This is a pair. How many shoes in ten pairs?



10. Take 3 from 8.



$$8 - 3 = \square$$

