

Test 18


1.

$$7 - 3 = \square$$

2.

$$24 = 2 \text{ tens } \square \text{ units}$$


3.



10 minutes past
6 o'clock

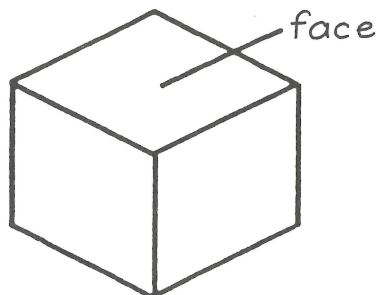
minutes past

o'clock



4.

A cube has faces.



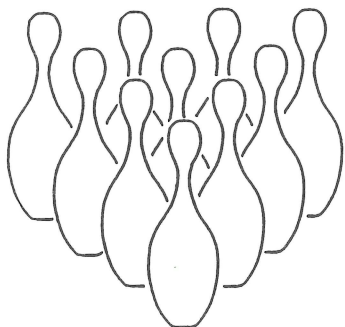
5.

Shade 3 boxes that add up to 6.

| | | | | |
|---|---|---|---|---|
| 1 | 2 | 0 | 1 | 3 |
|---|---|---|---|---|

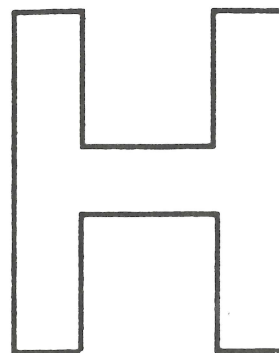
6.

10 pins are standing.
If 4 are knocked down how
many will be left standing?



7.

Shade $\frac{1}{2}$ of this letter.



8.

Draw the next
two shapes.



9.

$$12 - \square = 11$$

10.

$$\square - 3 = 5$$

