



Test 17

1.

12 units = ten + units

2.

Two cats have legs.

3.

Shade $\frac{1}{2}$ of this letter.

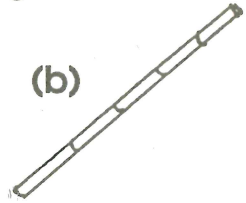


4.


Which is the longest?



(b)



(c)



5.

Fill in the missing numbers.



6.

Fill in the missing numbers.

24, 26, , , , 34

7.

Tina ate half of her chocolates and had 7 left. How many did she have at the start?




chocolates

8.

Show

12:05



9.

$$6 - \square = 6$$

10.

$$1 + \square = 4$$

