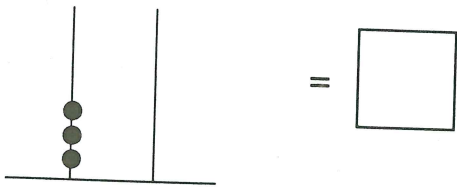





Test 12



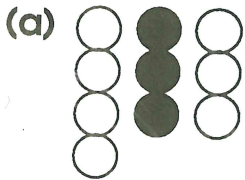
1. tens units



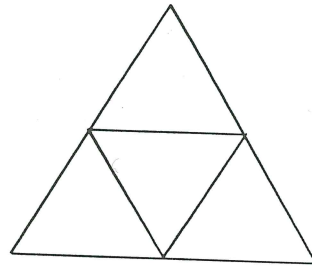
2. Shade two boxes that add up to 5.




3. Which set is $\frac{1}{2}$ shaded?



4. There are triangles.

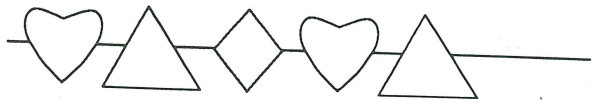


5. Fill in the missing numbers.



The time is past

7. Draw the next shape.



8. $4 + 4 + \text{} = 12$

9. 10 less than 70 is

10. $9 - 1 = \text{}$

