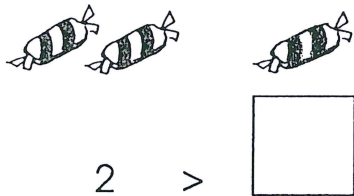




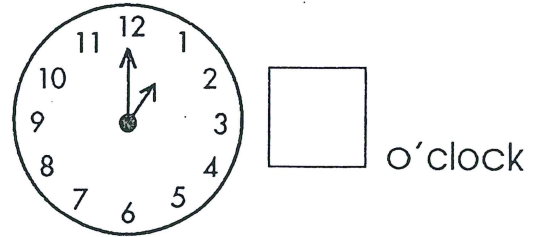
Test 12



1.

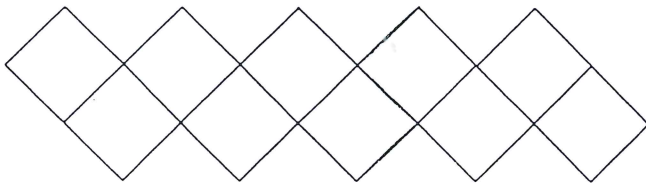


2.



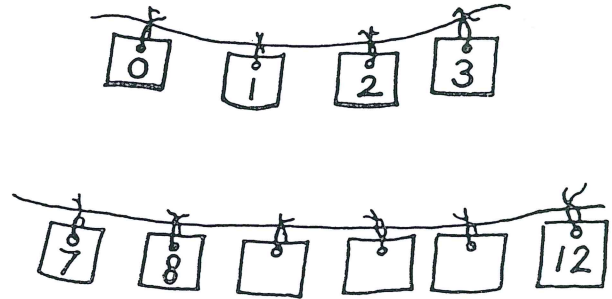
3.

How many squares?



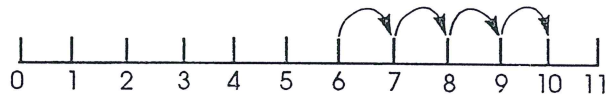
4.

Fill in the missing numbers.



5.


$$6 + 4 = \square$$




6.

Take two from six.

$$6 - 2 = \square$$




7.



$$5 - 1 = \square$$

8.

Fill in the missing numbers.



9.

$$4 + 6 = \square$$



10.

