

Bake Off Challenge Cards - Addition and Subtraction

1. Isabelle made **15 cupcakes**. Her friend Lucy made **13 cupcakes**.


How many cupcakes did they make altogether?



Bake Off Challenge Cards - Addition and Subtraction

2. David has **32g of flour** in the cupboard. He buys **another 50g**.

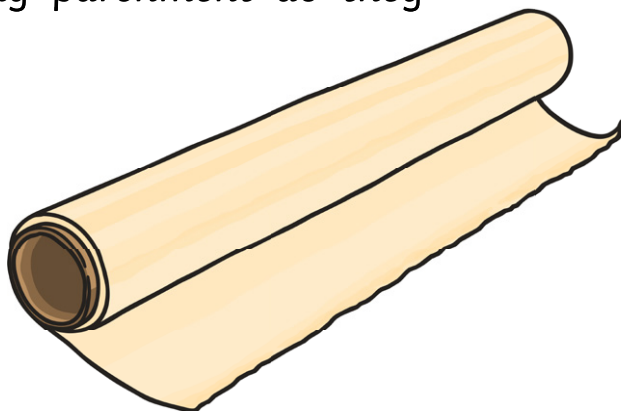
How much flour does he have now?



Bake Off Challenge Cards - Addition and Subtraction

3. Rosa has **17m of baking parchment**. Her mum has another roll with **25m of baking parchment**.

How much baking parchment do they have altogether?



Bake Off Challenge Cards - Addition and Subtraction

4. On the shelf, there are two bags of sugar.

Bag number 1 = 32g

Bag number 2 = 45g

How much do the two bags of sugar weigh in total?



Bake Off Challenge Cards - Addition and Subtraction

5. Jessica bakes **17 biscuits** on Wednesday and **another 12** on Thursday. On Friday, she bakes **9 more** biscuits.


How many biscuits has she baked altogether?



Bake Off Challenge Cards - Addition and Subtraction

6. A cake stall sells **flapjacks for 15p**, **cupcakes for 10p** and **biscuits for 8p**.

How much would it cost to buy two flapjacks and two biscuits?



Bake Off Challenge Cards - Addition and Subtraction

7. A cake costs **25p**. I give the baker **£1**.


How much change will I get?




Bake Off Challenge Cards - Addition and Subtraction

8. Rowan made **36 fairy cakes**. He burns **15** of them in the oven.

How many fairy cakes are not burnt?



Bake Off Challenge Cards - Addition and Subtraction



9. Rosalind bakes **48 cookies**. Her family eat **26** of them.

How many cookies does she have left?

Bake Off Challenge Cards - Addition and Subtraction

10. A bag of sugar weighs **75g**. I use **38g** to make some biscuits.

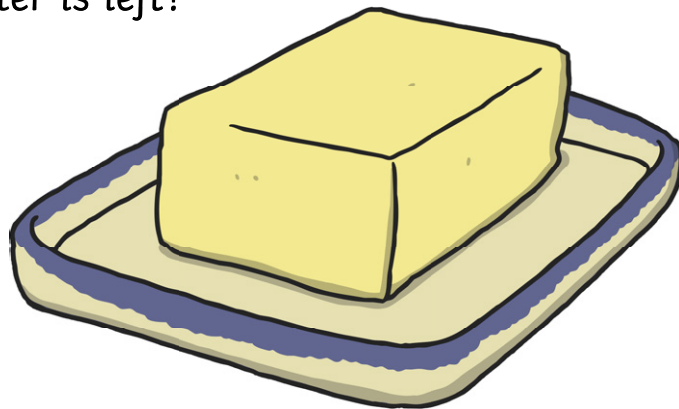
How much sugar do I have left?



Bake Off Challenge Cards - Addition and Subtraction

11. A block of butter weighs **100g**. I put **65g** of it in my strawberry cake.


How much butter is left?



Bake Off Challenge Cards - Addition and Subtraction

12. A loaf of bread comes out of the oven at **11:30AM**. It took **2½ hours** to cook.

What time did the bread go into the oven?





Bake Off Challenge Cards



Bake Off Challenge Card Answers

1. Isabelle made 15 cupcakes. Her friend Lucy made 13 cupcakes. How many cupcakes did they make altogether?
28
2. David has 32g of flour in the cupboard. He buys another 50g. How much flour does he have now?
82g
3. Rosa has 17m of baking parchment. Her mum has another roll with 25m of baking parchment. How much baking parchment do they have altogether?
42m
4. On the shelf, there are two bags of sugar. Bag number 1 = 32g. Bag number 2 = 45g. How much do the two bags of sugar weigh in total?
77g
5. Jessica bakes 17 biscuits on Wednesday and another 12 on Thursday. On Friday, she bakes 9 more biscuits. How many biscuits has she baked altogether?
38
6. A cake stall sells flapjacks for 15p, cupcakes for 10p and biscuits for 8p. How much would it cost to buy two flapjacks and two biscuits?
46p

7. A cake costs 25p. I give the baker £1. How much change will I get?
75p
8. Rowan made 36 fairy cakes. He burns 15 of them in the oven. How many fairy cakes are not burnt?
21
9. Rosalind bakes 48 cookies. Her family eat 26 of them. How many cookies does she have left?
22
10. A bag of sugar weighs 75g. I use 38g to make some biscuits. How much sugar do I have left?
37g
11. A block of butter weighs 100g. I put 65g of it in my strawberry cake. How much butter is left?
35g
12. A loaf of bread comes out of the oven at 11:30AM. It took $2\frac{1}{2}$ hours to cook. What time did the bread go into the oven?
9:00AM