

# Test 11

1.


$$5 + \square = 7$$

2. Shade two boxes that add up to 2.

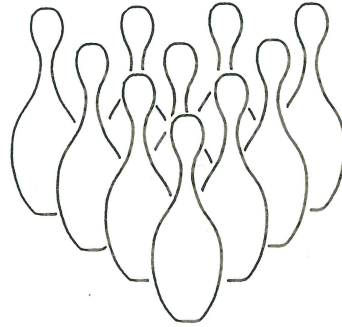
1	2	0	1	3
---	---	---	---	---

3. The time is

minutes past  o'clock.



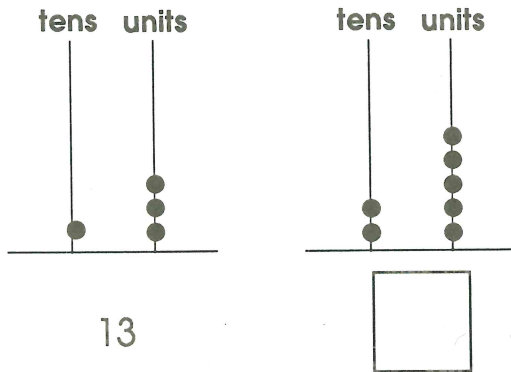
4. 10 pins are standing.  
If 3 are knocked down how many will be left standing?



5. Fill in the numbers.

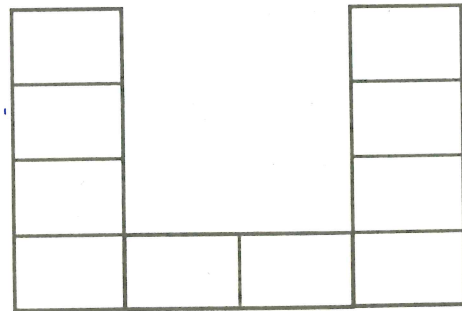


6.



7.

Shade  $\frac{1}{2}$  of this shape.



8.

$$5 + \square = 10$$

9.

$$60 - 10 = \square$$

10.

$$\frac{1}{2} \text{ of } 8 = \square$$

