


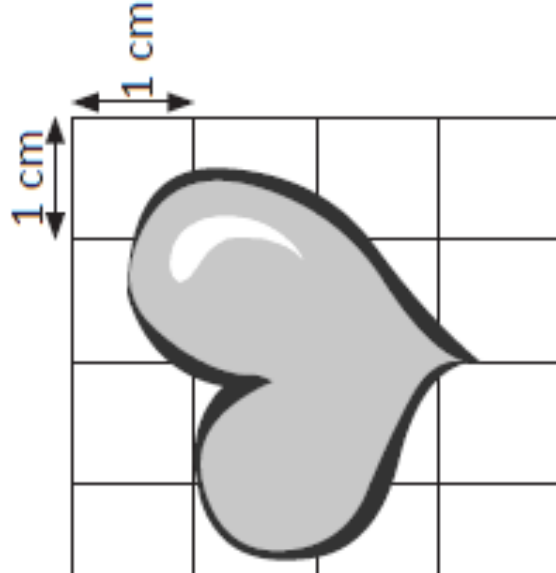
Estimate the area of these shapes:



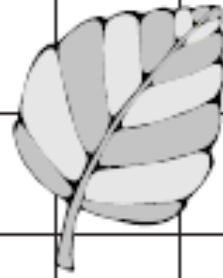
a $A = \underline{\hspace{1cm}} \text{ cm}^2$



b $A = \underline{\hspace{1cm}} \text{ cm}^2$



c $A = \underline{\hspace{1cm}} \text{ cm}^2$



d $A = \underline{\hspace{1cm}} \text{ cm}^2$



e $A = \underline{\hspace{1cm}} \text{ cm}^2$

You could mark
the whole squares
one colour, then
match part squares
with another.

