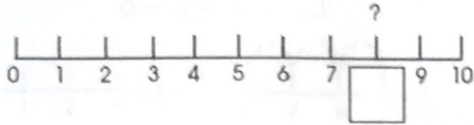




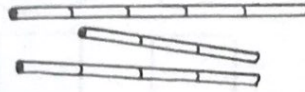
# Test 10

X

1. Fill in the missing number.



2. Shade the longest bar.



3. Four is more than three.

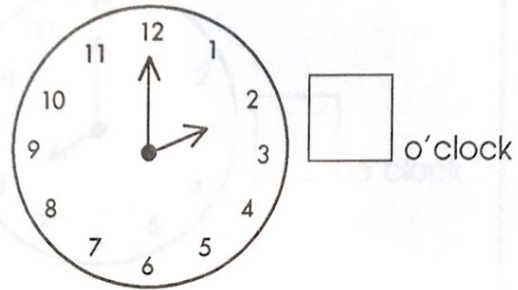
$4 > 3$

Two groups of three blocks. The left group has three blocks. The right group has three blocks, with dashed lines connecting them to the left group.

$3 > \square$

Two boxes of candy. The left box contains three pieces of candy, and the right box contains two pieces of candy.

4.



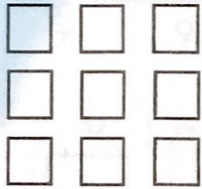
5.

2 less than 8 is

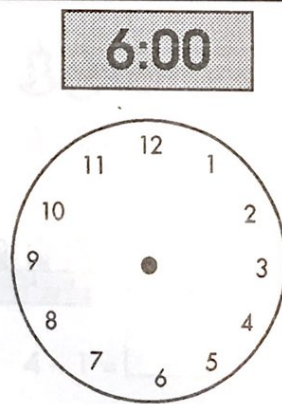
Eight items: six oranges and two apples.

6.

How many squares?



7.



8.

$5 + 4 = \square$

A number line from 0 to 10. Four curved arrows show jumps of 1 unit each, starting from 5 and ending at 6, 7, 8, and 9.

9.

Take 2 from 7.

Seven items: three round items and four wrapped items.

10.

Two groups of three blocks. The left group has three blocks, and the right group has three blocks.

$>$

