
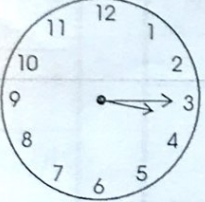
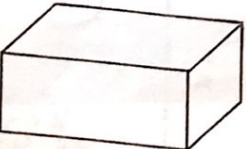
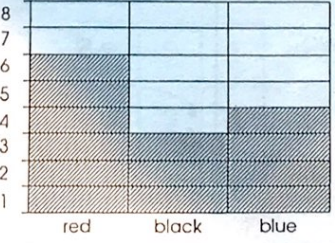




# Test 10

## Answers

1. What is the next number? 6, 9, 12, ___	2. How many days in twelve weeks?
3. What number is 20 more than 80?	4. $1\frac{1}{2} = \frac{3}{2}$ $3\frac{1}{2} = \frac{7}{2}$
5. What fraction of this shape is shaded?	
6. Write this time in figures. (Remember: $\frac{1}{4}$ past 10 is written 10.15). 	7. $5 + 5 + 15 = \underline{\quad}$
9. $4 \times \underline{\quad} = 20$	8. What is the sum of four tens? 10. Add 8, 12 and 5.
11. How many tens in 120?	12. What year came before 1994?
13. How many faces has a cuboid? (6, 8 or 12) 	14. How many more red cars are there than blue? 
15. Carol's watch is 5 minutes slow. If her watch shows 8.55, what is the correct time?	

- 1.
- 2.
- 3.
- 4.
- 5.
- 6.
- 7.
- 8.
- 9.
- 10.
- 11.
- 12.
- 13.
- 14.
- 15.

