







# Test 1

## Answers

1. Take 10 from 105.	2. Gary has 18 comics and Francis has 30. How many more comics has Francis?
3. Which shape is a rectangle? a)  b)  c) 	4. 49 rounded off to the nearest ten is 50. Round off 82 to its nearest ten.
5. 16 children were divided into 4 groups. How many were in each group?	
6. What time is this? 	7. What is the next number? 12, 15, 18, ___
9. What is half of 24?	8. What is 10 more than 99?
11. How many 10s in 150?	10. $12 + 18 + 10 = \underline{\quad}$
13. The bus should have left at five minutes past 7 but was 10 minutes late. When did it leave?	12. What is the value of the 8 in 387?
15. What is the next number? 13, 18, 23, 28, ___	14. A bottle of lemonade fills 6 glasses. How many bottles are needed to fill 24 glasses?

1.
2.
3.
4.
5.
6.
7.
8.
9.
10.
11.
12.
13.
14.
15.

