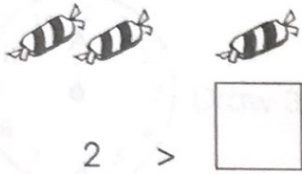




Test 12

x

1.



2 >


2.



o'clock

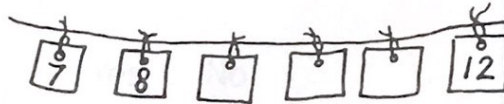

3.

How many squares?



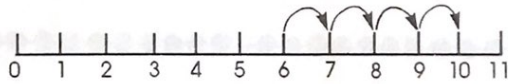
4.

Fill in the missing numbers.



5.

$6 + 4 =$



6.

Take two from six.

$6 - 2 =$



7.



$5 - 1 =$

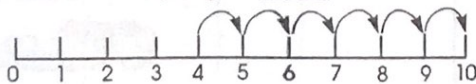
8.

Fill in the missing numbers.

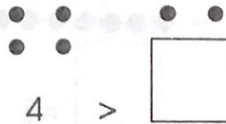


9.

$4 + 6 =$



10.



4 >

