
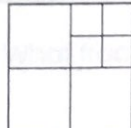
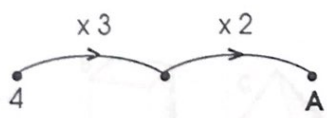



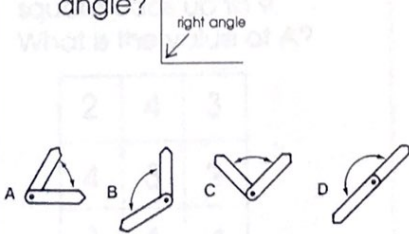




# Test 13

## Answers

1. What is the sum of 12, 10 and 8?	2. If today is Saturday, what day will it be in 3 days time?
3. How many months in a $\frac{1}{2}$ year?	4. What fraction of this set is shaded? 
5. How many squares can you count here? 	
6. What number is at <b>A</b> ? 	7. Justin is 3 years older than Jenny. Jenny is 12 years old. How old is Justin?
9. Is this shape a cube or a cuboid? 	8. Is this shape a cube or a cuboid? 
11. How many tens in 200?	10. Take 3 from 300. 12. 16 is half of 32, 34 or 36?
13. 5 minutes past 9 is written 9.05. Write this time in figures. 	14. Which angle here is a right angle? 
15. How many minutes are there in three $\frac{1}{4}$ hours?	

1.
2.
3.
4.
5.
6.
7.
8.
9.
10.
11.
12.
13.
14.
15.

