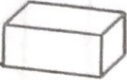









# Test 11

## Answers

|   |  |
|---|--|
| 1. How many corners has a cuboid?<br>corner    | 2. What is the sum of 5, 2 and 18?   |
| 3. Mary was 9 years old in 1993. In what year was she born?   | 4. Which is the odd one out?<br>A  B  C  |
| 5. What is the greatest number you can make from these?<br><div style="display: flex; justify-content: space-around; align-items: center;"> <div style="border: 1px solid black; padding: 5px; margin: 2px;">1</div> <div style="border: 1px solid black; padding: 5px; margin: 2px;">3</div> <div style="border: 1px solid black; padding: 5px; margin: 2px;">2</div> </div> |  |
| 6. What fraction of this shape is shaded?<br>$(\frac{1}{4}, \frac{1}{2}, \frac{3}{4})$<br>   | 7. What number is 10 less than 200?<br><br>8. What is the sum of 6, 14 and 10?   |
| 9. What number is 10 more than 195?   | 10. Which number does not belong?<br>15, 13, 12, 9, 6, 3   |
| 11. Is $5 \times 4 < 4 \times 5$ ?  | 12. How many tens in 190?  |
| 13. What year was it two years after 1991?  | 14. What number is at A?<br>   |
| 15. How many minutes in $\frac{1}{4}$ of an hour?   |  |

|     |
|-----|
| 1.  |
| 2.  |
| 3.  |
| 4.  |
| 5.  |
| 6.  |
| 7.  |
| 8.  |
| 9.  |
| 10. |
| 11. |
| 12. |
| 13. |
| 14. |
| 15. |

