

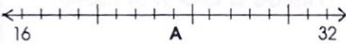





Test 12

Answers

1. How many quarters in $\frac{1}{2}$?	2. How many edges has a cuboid? 									
3. What is the missing number? 20, 24, 28, 32, ____, 40	4. How many months in one year?									
5. There are ____ days in a year. (31, 60 or 365)										
6. What number is at A? 	7. What number is at A? 									
9. What number is halfway between 16 and 24?	8. What number is 10 less than 305?									
10. How many minutes in $\frac{1}{2}$ an hour?	11. A matchbox and a cornflakes box are both _____. (cubes, cuboids, rectangles)									
12. Is $67 > 76$?	13. What fraction of this shape is shaded? ($\frac{1}{4}$, $\frac{1}{2}$, $\frac{3}{4}$, $\frac{4}{4}$) 									
14. Each line in this magic square add up to 6. What is the value of A? <table border="1" data-bbox="808 1444 1000 1633"> <tr><td>1</td><td>2</td><td>3</td></tr> <tr><td>4</td><td>2</td><td>0</td></tr> <tr><td>1</td><td>2</td><td>A</td></tr> </table>	1	2	3	4	2	0	1	2	A	15. In which of these numbers is the 2 worth 2 tens? 281, 128, 812
1	2	3								
4	2	0								
1	2	A								

1.
2.
3.
4.
5.
6.
7.
8.
9.
10.
11.
12.
13.
14.
15.

