






Test 3

Answers

1. Is $12 > 3 \times 3$?	2. How many hundreds in 1000?										
3. What is $\frac{1}{2}$ of 100?	4. What is this shape? 										
5. Round off 77 to its nearest ten. 											
6. 3 boys and 2 girls have collected ten stamps each. How many stamps have they collected altogether?	7. What is the value of the 7 in 1257?										
	8. What is the missing number? 11, 15, 19, ____, 27										
9. What is $\frac{1}{2}$ of 96?	10. Add 25, 10 and 15.										
11. How many hundreds in 2000?	12. Round off 24 to its nearest ten.										
13. Write this time in figures. 	14. Eye colour blue brown <table border="1"><tr><td rowspan="3">Hair colour</td><td>blond</td><td>7</td><td>4</td></tr><tr><td>brown</td><td>3</td><td>6</td></tr><tr><td>black</td><td>1</td><td>2</td></tr></table> How many people have brown hair and blue eyes?	Hair colour	blond	7	4	brown	3	6	black	1	2
Hair colour	blond		7	4							
	brown		3	6							
	black	1	2								
15. What is the greatest number you can make from 7, 9 and 3?											

1.
2.
3.
4.
5.
6.
7.
8.
9.
10.
11.
12.
13.
14.
15.

