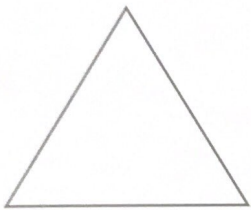
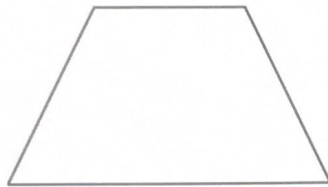


Name the 2D Shape




Number of sides _____

Name _____



Number of sides _____

Name _____




Number of sides _____

Name _____



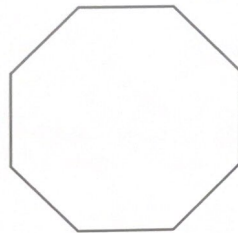
Number of sides _____

Name _____




Number of sides _____

Name _____




Number of sides _____

Name _____



Number of sides _____

Name _____



Number of sides _____

Name _____