




Look at the pictogram showing favourite ice-creams at a party

mint	
chocolate	
strawberry	

46) How many children like mint the best?

47) How many children like chocolate the best?

48) How many children went to the party?

49) Double 3 is

50) Double 4 plus 1 is