



How long is it between the two times shown?



and 


hours



and 


hours



and 

hours



and 

hours

