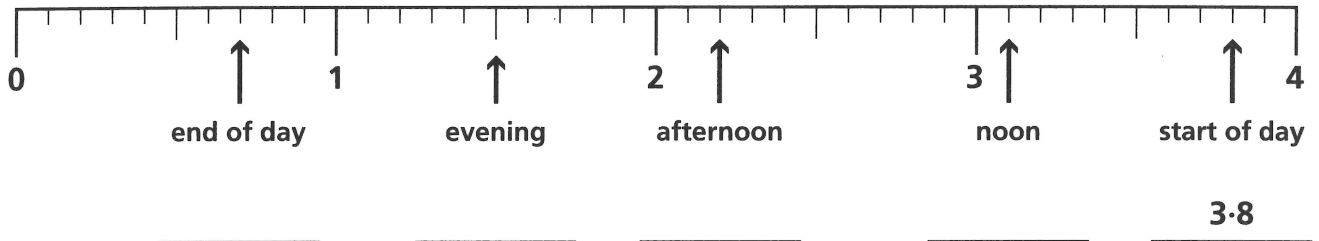




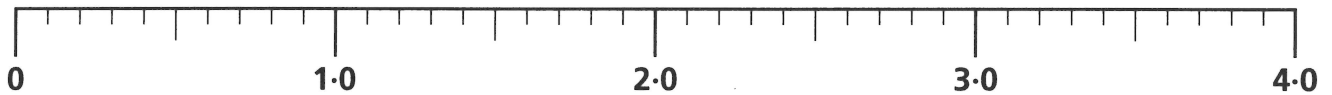
Hot air

- 1 There were 3.8 units of fuel in the balloon's tank at the start of the day. Write, in decimal form, the amount of fuel at the other times shown.




- 2 Draw arrows on this gauge to show:

0.4 16 tenths 2.9 3 units and 3 tenths 37 tenths



- 3 Complete the table to show the amount of fuel used in three different ways.

Sun	36 tenths	3 units and 6 tenths	3.6
Mon	25 tenths		
Tue		4 units and 4 tenths	
Wed			5.1
Thu	30 tenths		
Fri	9 tenths		
Sat			6.0



- 4 These displays show the balloon's height in metres at different times.

78.1

17.4

30.8

4.3

22.2

Circle a digit which has the value:

- (a) 2 tenths (b) 3 tenths (c) 4 units (d) 8 tenths (e) 1 ten