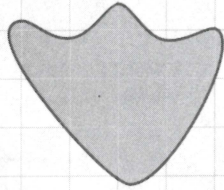


## On the right track

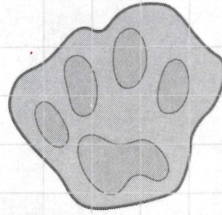
- 1 Dan spotted these footprints on the trail.  
Find the approximate area of each.

(a) Duck



Area: about 9cm<sup>2</sup>

(b) Wildcat




Area: about 13cm<sup>2</sup>

- 2 Draw 2 animal or bird footprints. Write the area of each.

*Answers depend on the children's drawings.*

- 3 (a) Draw an animal or bird footprint with an area of about 20cm<sup>2</sup>.

(b) Ask a friend to check its area.



*Answers depend on the children's drawings.*

- 4 Draw your own footprint on centimetre squared paper. Find the approximate area of your footprint.

Area: Answers depend on the children.

Ask your teacher what to do next.