

27

Area:
Irregular
shapes

Nature trail

1 The Junior Rangers find these pieces of litter on the nature trail. Find the approximate area of each.

(a)




Area: about 7 cm²

(b)



Area: about 8cm²

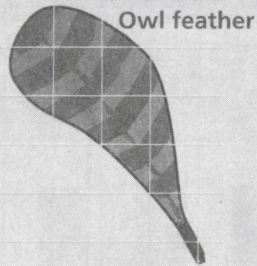
(c)



Area: about 11cm²

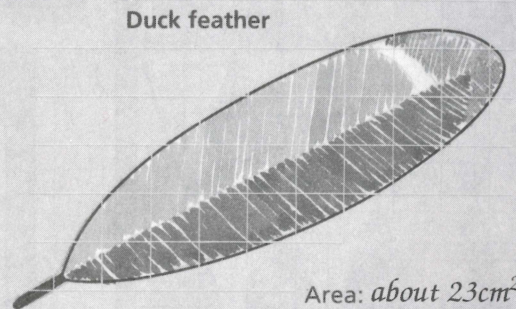
2 Find the approximate area of each of these.

(a)



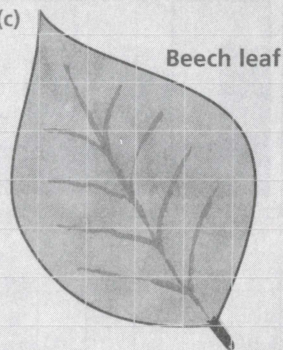
Area: about 8cm²

(b)



Area: about 23cm²

(c)



Area: about 22cm²

(d)



Area: about 14cm²