

TENTHS of Shapes

Colour the following decimal fractions on the shapes sheet.

- | | |
|-----------------------|-----------------------|
| (a) Colour 0.6 blue | (g) Colour 0.7 orange |
| (b) Colour 0.3 green | (h) Colour 0.5 grey |
| (c) Colour 0.8 pink | (i) Colour 0.9 black |
| (d) Colour 0.4 purple | (j) Colour 0.2 green |
| (e) Colour 1 red | (k) Colour 0.4 yellow |
| (f) Colour 0.1 brown | |

Beside each shape write the decimal fraction **NOT** coloured.

MAKE 1

Fill in the missing numbers.

(1) $0.7 + \square = 1$

(4) $\square + 0.2 = 1$

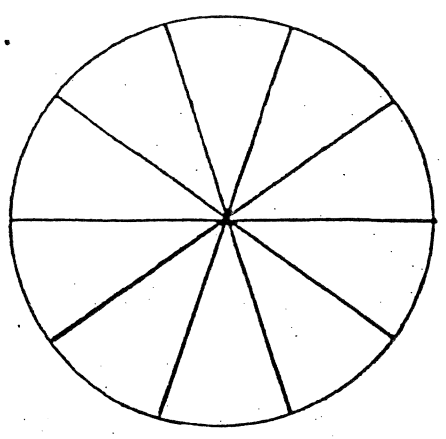
(2) $1 - \square = 0.4$

(5) $0.5 + \square = 1$

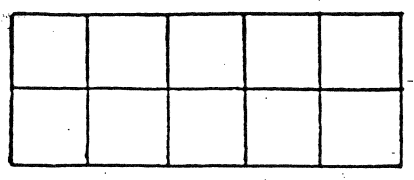
(3) $\square = 1 - 0.1$

(6) $0.1 + \square + 0.7 = 1$

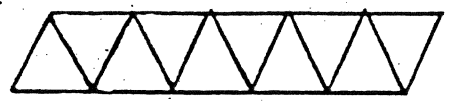
a.




b.



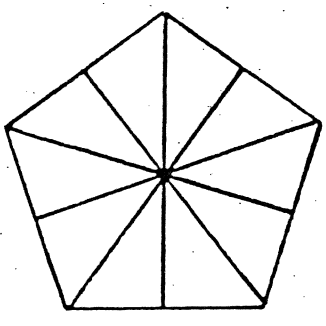
c.



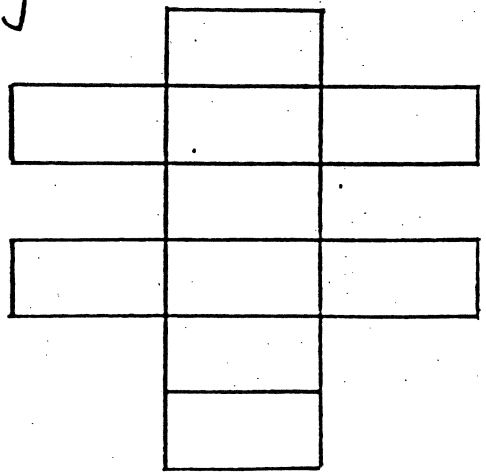
d.



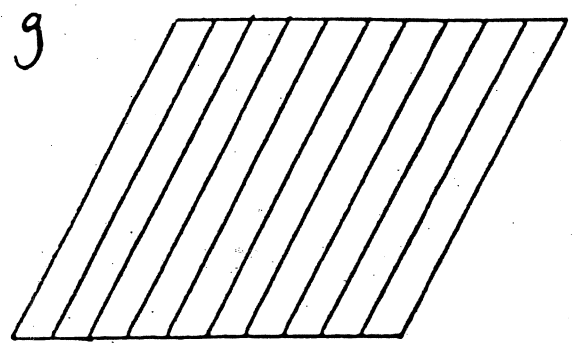
e.



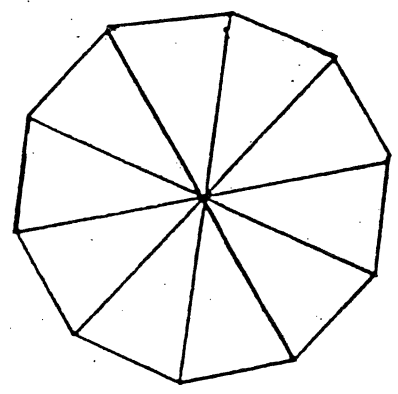
f.



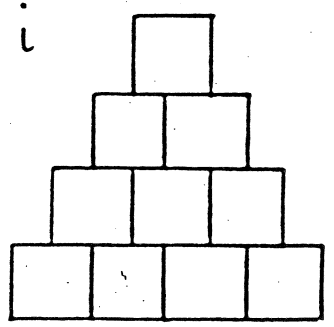
g.



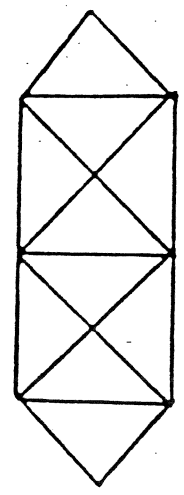
h.



i.



j.



k.

