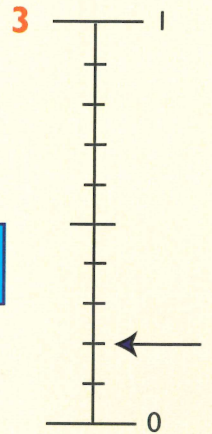
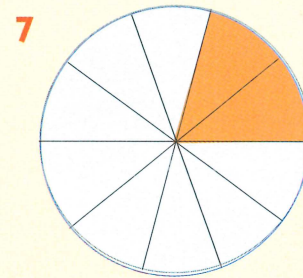
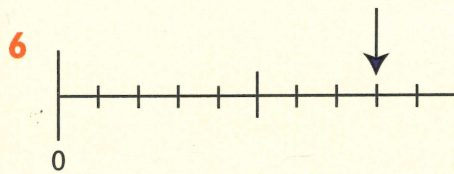





Units Tenthths

Write each as a fraction.



Write each as a decimal.

Write these in order, smallest to largest.

8. 0.6, $\frac{7}{10}$, eight tenths

8 0.6, eight tenths, $\frac{7}{10}$


9 four tenths, 0.3, $\frac{5}{10}$

10 seven tenths, 0.9, $\frac{8}{10}$

11 0.7, $\frac{3}{10}$, 0.5

12 $\frac{5}{10}$, $\frac{8}{10}$, 0.6

13 $\frac{3}{10}$, $\frac{1}{2}$, 0.4



Write your own set of fractions and decimals. Swap with your partner and put them in order.



I can change a tenths fraction to a decimal