



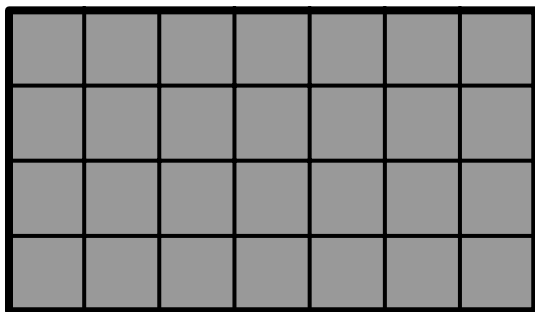
Name: _____ Class: _____

Find the area of each rectangle.
Find and label each side length.
Multiply to find the area.

1

Area: 28 units²

4
units




7 units

2

Area: 30 units²

6
units




5 units

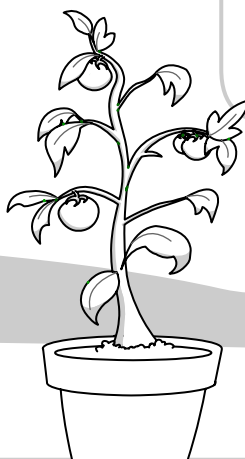
3

Area: 9 units²

3
units




3 units



4

Area: 24 units²

8
units




3 units

5

Area: 40 units²

4
units

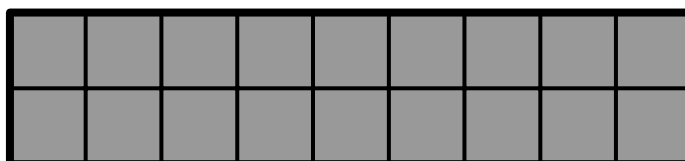


10 units

6

Area: 18 units²

2
units



9 units