


1a

- 15×3 .
- One quarter of 48.
- $24 + \square = 100$.
- 10% of 80p.
- 0.2×10 .
- $50 + 39$.
- Is 29 a prime number?
- $42 \div 7$.
- $80 - 27$.
- Approximately, what is 39×11 ?


1b

- What number multiplied by 11 gives 110?
- 29 minus 7, plus 8.
- What is the difference between 66 and 200?

- A Big Dipper ride cost £1.80.
How much for 3 rides?



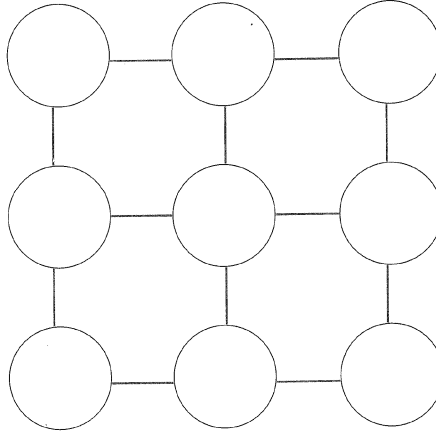
- Divide 2000 by 20.
- Is 1387 odd or even?
- If the perimeter of a square is 20cm, how long is one side?
- How many quarters in seven and a half?
- If 27 nines equal 243, what are 28 nines?
- A cat and a dog together weigh 18kg.
The dog is twice as heavy as the cat.
How much does the cat weigh?



1c

Odd job

Copy the diagram.



Use each of the numbers 1 to 9.

Write one number in every circle.

The difference between each pair of joined numbers must be odd.

Find different ways of doing it.

1 2 3 4 5 6 7 8 9

1d

- | | | | |
|---|------------------------|----|---------------------------------|
| 1 | Two cubed. | 6 | 46×10 . |
| 2 | $6 \div 10$. | 7 | Six sixes. |
| 3 | $2 + 7 + 6$. | 8 | Increase 14 by 17. |
| 4 | 3×25 . | 9 | $33 - 18$. |
| 5 | $\square + 37 = 100$. | 10 | How many 50p coins make £11.50? |