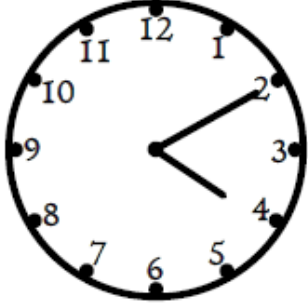


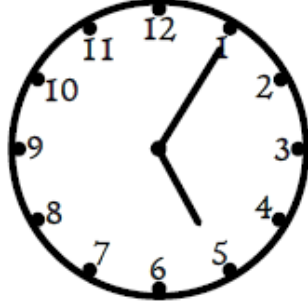
Which answer?

Circle the correct time.



2:20
OR
4:02
OR
4:10

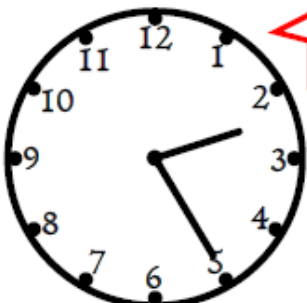
The clock face shows the hour hand between 2 and 3, and the minute hand pointing at 4.



5:05
OR
5:01
OR
1:25

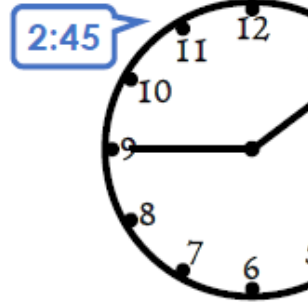
The clock face shows the hour hand between 5 and 6, and the minute hand pointing at 1.

Explain the mistakes



5 minutes past 2

The clock face shows the hour hand between 2 and 3, and the minute hand pointing at 4. A red callout box points to the minute hand.



2:45

The clock face shows the hour hand between 2 and 3, and the minute hand pointing at 9. A blue callout box points to the hour hand.