


Race score cards

- 1 (a) Complete each score by subtracting course and time penalty points from race points.
(b) Add to find the total score for each boat.



Sprite

	Race points	Course penalty	Time penalty	Score
1	38.5	0.7	0.4	37.4
2	55.3	1.5	0.5	
3	38.4	4.8	1.9	


Total score



Dawn

	Race points	Course penalty	Time penalty	Score
1	42.6	1.6	0.8	
2	58.0	0.9	0.3	
3	34.2	3.0	1.2	


Total score



Imp

	Race points	Course penalty	Time penalty	Score
1	41.6	2.1	0.7	
2	61.0	1.2	0.3	
3	32.2	2.4	1.2	

Total score



Storm

	Race points	Course penalty	Time penalty	Score
1	41.7	0.7	0.3	
2	50.1	1.5	0.3	
3	39.1	4.8	2.6	


Total score



Hope

	Race points	Course penalty	Time penalty	Score
1	40.5	1.6	0.9	
2	54.5	0.3	0.5	
3	37.2	3.0	2.6	

Total score



Fairwind

	Race points	Course penalty	Time penalty	Score
1	35.7	2.1	0.2	
2	52.6	1.2	0.5	
3	42.6	2.4	1.9	

Total score

- 2 The winner is the boat with the highest total score. Which boat wins? _____