







- 1 The children look at the sports filming schedule.
Find the **starting time** for each film crew.

crew	sport	starts at	films for	finishes at
A	football		2 hours	4.45 pm
B	golf		3 hours	5.50 pm
C	cricket		3 hours	2.10 pm
D	sailing		35 minutes	10.45 am
E	motor racing		25 minutes	12.45 pm
F	snooker		45 minutes	11.50 pm



- 2 At what time before filming starts should each presenter report to the make-up artist?

Time needed for make-up	35 minutes	15 minutes	20 minutes	40 minutes	25 minutes
					
	Anne	Desmond	Shareen	Bill	Tracey
Filming starts at	10.30 am	6.00 pm	7.10 am	8.25 am	10.10 pm

- 3 The children meet Josh, the star of *Kidsklub*.
Find when Josh should **start** each of these activities.

Count back the hours then count back the minutes.



	time needed	to finish at	
(a)	make-up	1 hour 10 minutes	8.45 am
(b)	costume	1 hour 25 minutes	10.35 am
(c)	rehearsal	2 hours 15 minutes	1.20 pm
(d)	filming	1 hour 50 minutes	4.00 pm

- 4 Costumes are made for the actors. Find the time when each costume was **started**.

	time taken	finished at	
(a)	mask	1 hour 20 minutes	3.10 pm
(b)	hat	1 hour 35 minutes	10.20 am
(c)	coat	2 hours 50 minutes	4.05 pm
(d)	long skirt	1 hour 25 minutes	12.15 pm
(e)	jacket	3 hours 30 minutes	1.20 pm
(f)	cloak	2 hours 45 minutes	2.25 pm

