



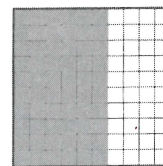
Signs



1 Each sign has 100 light cells.
Colour the given fraction of each sign.



0.52



0.60



0.08

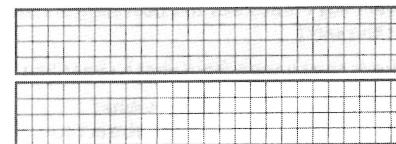


0.77


Many other ways of colouring are possible.

One whole sign and 34 hundredths of the other sign is coloured.


In decimal form
1 whole and 34 hundredths is 1.34



2 Write in decimal form the amount coloured.



1.25





2.60

3 Colour to show the given amount.

2.06

1.61



Many other ways of colouring are possible.

4 Write in decimal form:

3 units and 14 hundredths 3.14

4 units and 99 hundredths 4.99

5 units and 80 hundredths 5.80

3 units and 3 hundredths 3.03