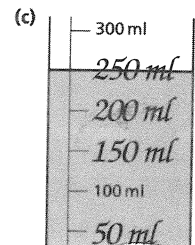
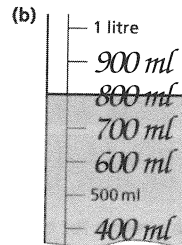



Feeds

1 Complete each scale by writing a volume beside each mark.




2 Colour the volumes of these ingredients on the scales in question 1.

(a) broth: 140 ml

(b) plant juice: 800 ml

(c) milk: $\frac{1}{4}$ l

3 Colour the bottles to show the volume in each baby's feed.



4 Use measuring jars and water to measure out feeds for these two babies:

Practical work.



Go to Textbook page 82.