





is north. Write the direction of the arrows.

1. north

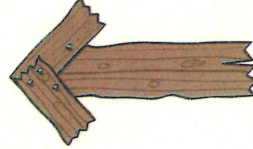
1 N




2 E




3 W




4 S




5 NE




6 SE



7 NW



8 SW

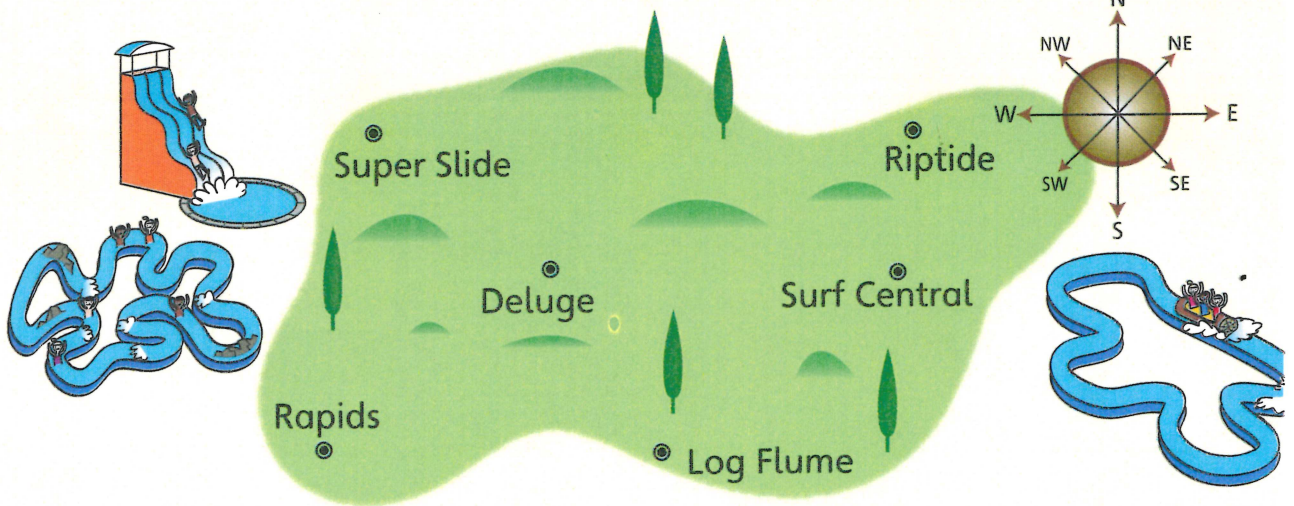


Write some pairs of directions that are opposite each other, e.g. north and south.

E+W
NE+SW
NW+SE

Where do you get to if you go:

9. Riptide



9 east from Super Slide? Riptide

10 south from Riptide? Surf Central

11 west from Surf Central? Deluge

12 north from Rapids? Super Slide

13 north-east from Log Flume? Surf Central

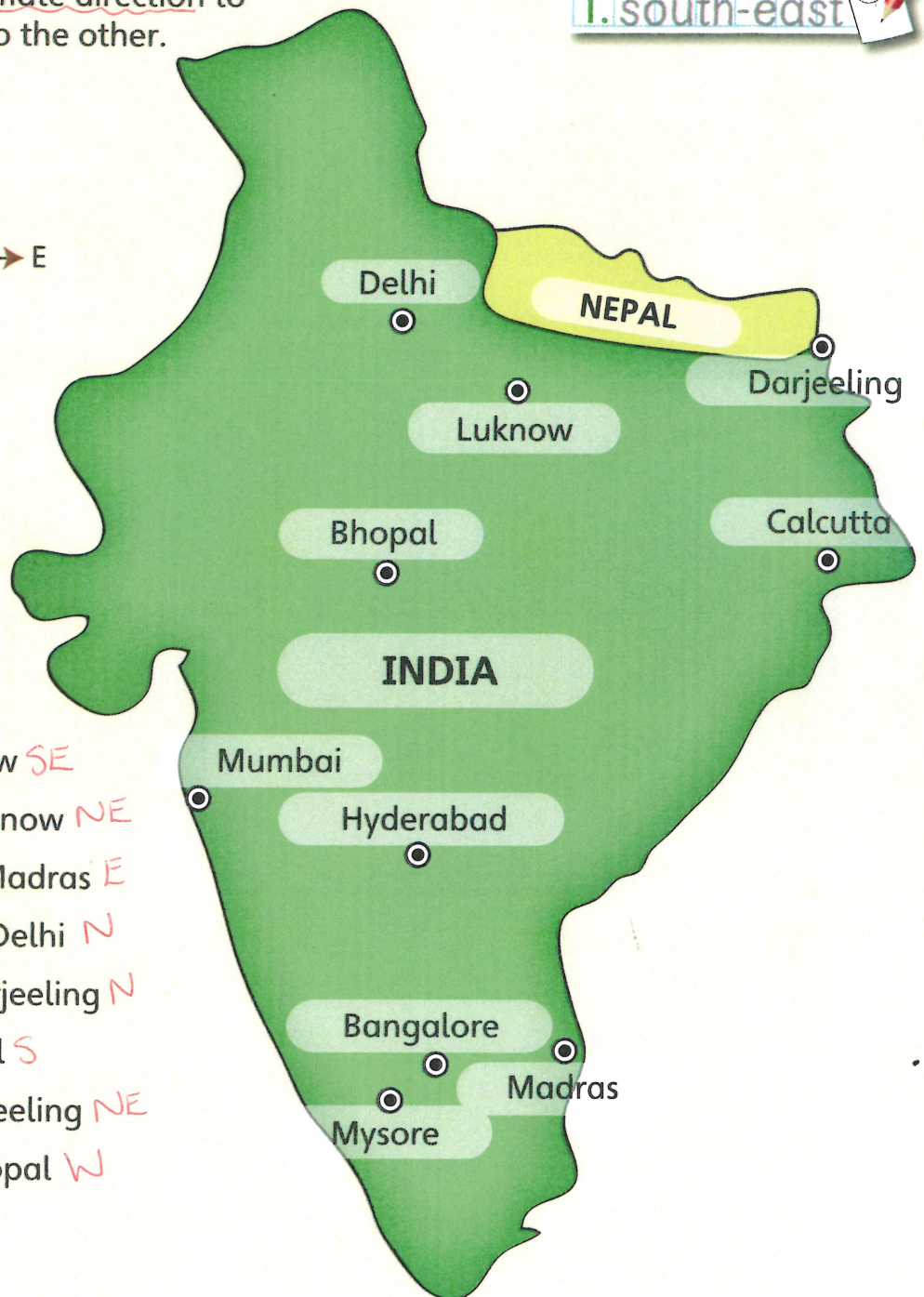
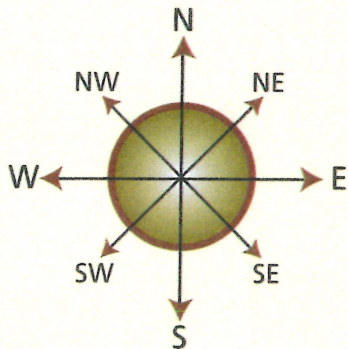
14 south-west from Deluge? Rapids



Direction

Write the approximate direction to go from one city to the other.

1. south-east



- 1 Delhi to Luknow **SE**
- 2 Mumbai to Luknow **NE**
- 3 Bangalore to Madras **E**
- 4 Hyderabad to Delhi **N**
- 5 Calcutta to Darjeeling **N**
- 6 Delhi to Bhopal **S**
- 7 Mysore to Darjeeling **NE**
- 8 Calcutta to Bhopal **W**



Look for a map of India in an atlas.
Write some direction questions of your own.



I can make journeys involving compass directions