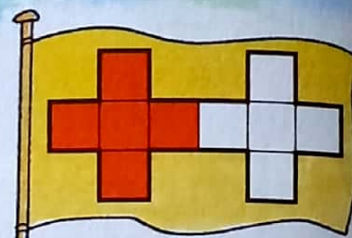


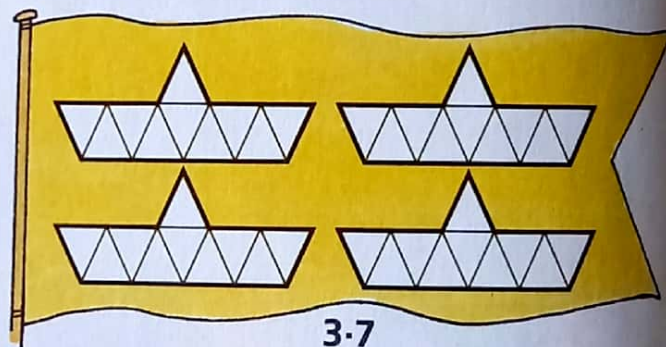
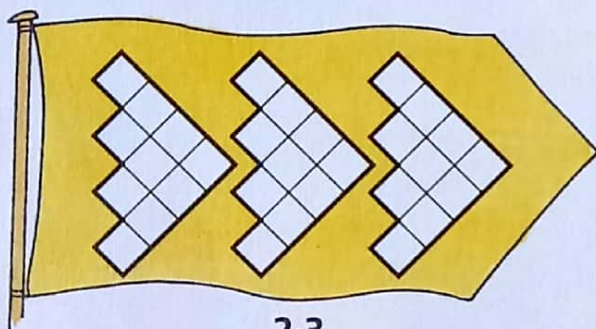
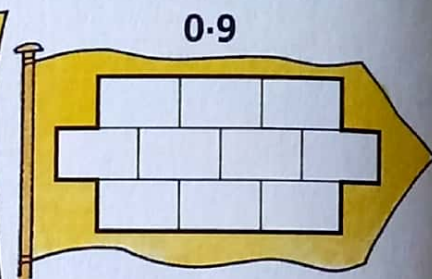

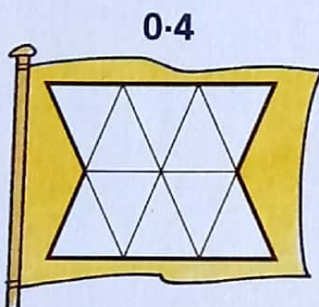
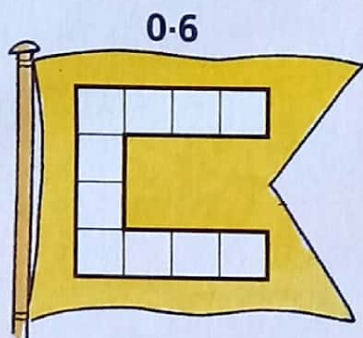
Pennants



0.5 ($\frac{5}{10}$ or $\frac{1}{2}$) of this pennant design is red. \longrightarrow



1 Colour each design to show the decimal fraction.



2 The water level changes during the year.

(a) The arrow shows the January level as **3.3 metres**. Complete the other levels.

(b) Draw arrows to show these levels
 April 2.5m October 2.1m
 June 0.9m December 3.0m.

