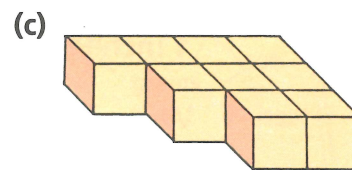

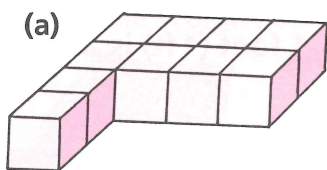


Each cube has a volume of 1 cubic centimetre or 1 cm^3 .

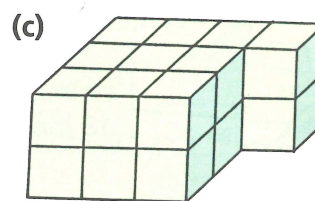
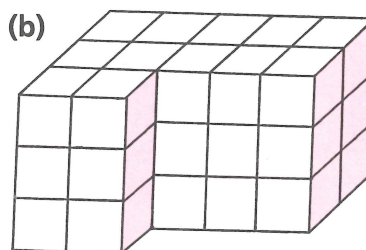



1 The cubes are joined together.
Find the volume in cubic centimetres of:



2 For each block of cubes find

- the number of cubic centimetres in each layer
- the number of layers
- the volume in cm^3 .



3 Find the volume of each block.

