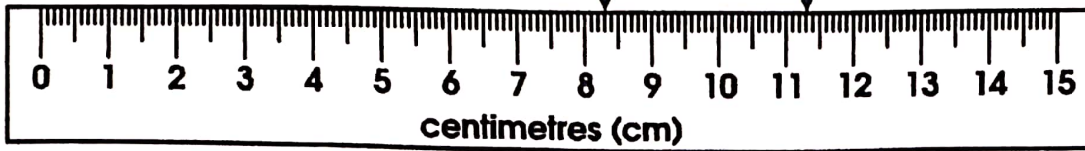


What is the distance between the two arrows?

1.



83mm
8.3cm

113mm
11.3cm

$$\begin{array}{r} 113 \\ - 83 \\ \hline \end{array}$$

30 mm

3 or 3.0 cm

2.



87mm
8.7cm

148mm
14.8cm

$$\begin{array}{r} 148 \\ - 87 \\ \hline 61 \end{array}$$

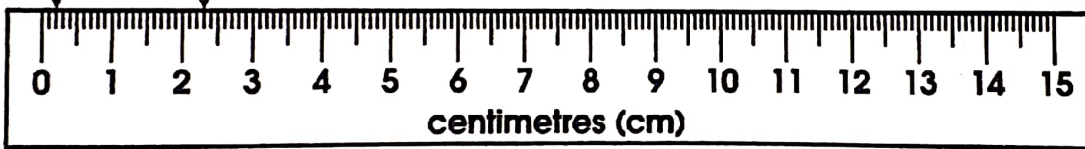
61 mm

6.1 cm

2mm or 0.2cm

23mm
2.3cm

3.



$$23 - 2$$

21 mm

2.1 cm

4.



95mm
9.5cm

108mm
10.8cm

$$\begin{array}{r} 108 \\ - 95 \\ \hline \end{array}$$

13 mm

1.3 cm

5.



22mm
2.2cm

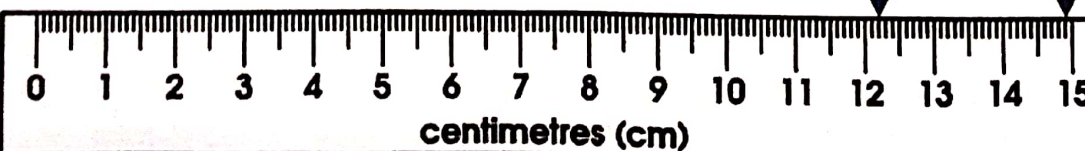
85mm
8.5cm

$$\begin{array}{r} 85 \\ - 22 \\ \hline \end{array}$$

63 mm

6.3 cm

6.



122mm
12.2cm

149mm
14.9cm

$$\begin{array}{r} 149 \\ - 122 \\ \hline \end{array}$$

27 mm

2.7 cm