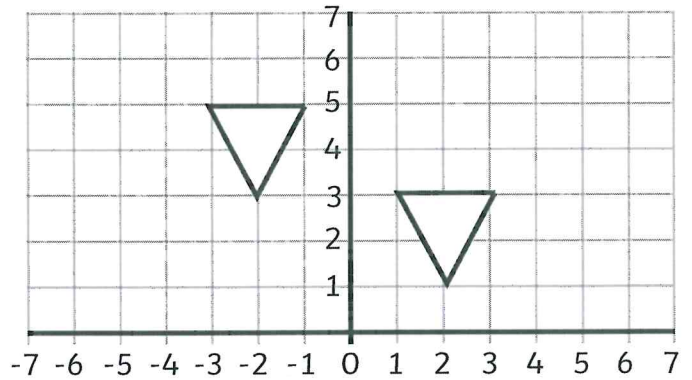
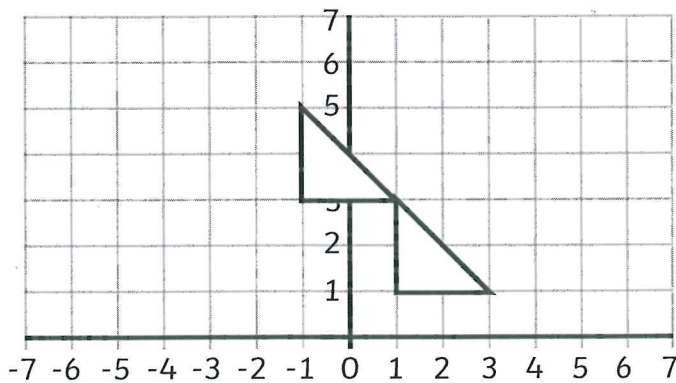


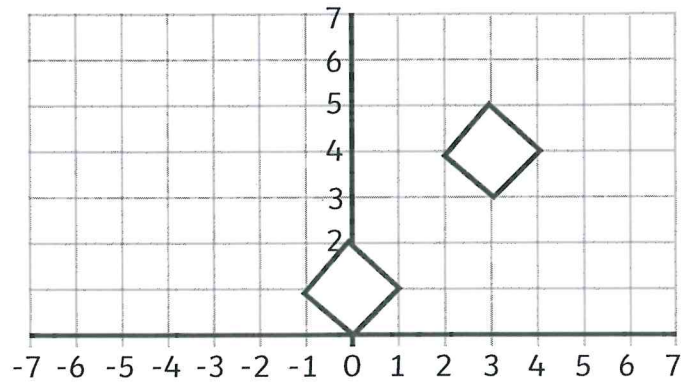
What are the co-ordinates of the new shape? **$(-6,0)$, $(-4,0)$, $(-4,2)$, $(-6,2)$**



What are the co-ordinates of the new shape? **$(2,1)$, $(3,3)$, $(1,3)$**



What are the co-ordinates of the new shape? **$(-1,3)$, $(1,3)$, $(-1,5)$**



What are the co-ordinates of the new shape? **$(0,0)$, $(1,1)$, $(0,2)$, $(-1,1)$**