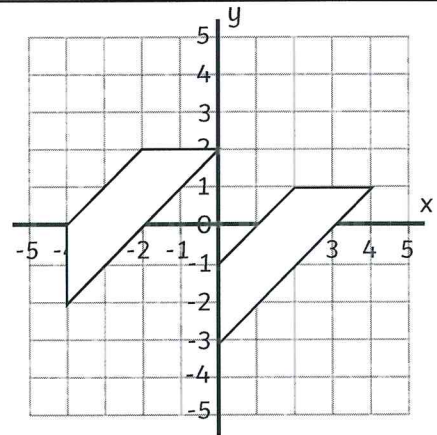
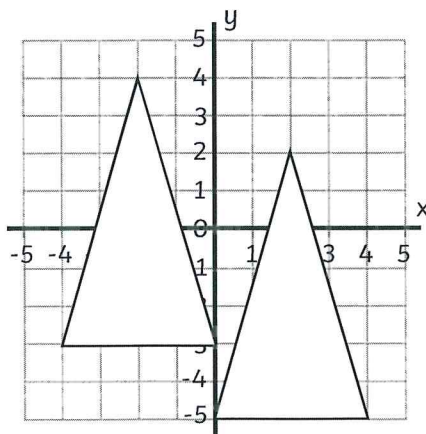


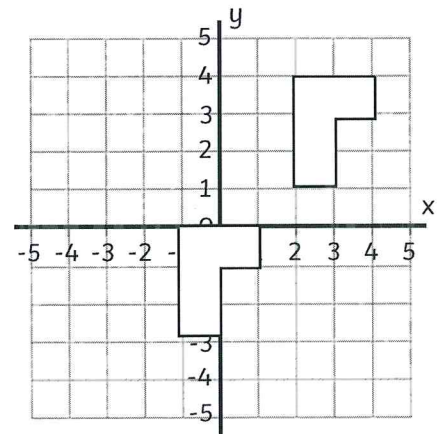
What are the co-ordinates of the new shape? $(0, 1), (4, 1), (4, 2), (0, 2)$



What are the co-ordinates of the new shape? $(-2, 2), (0, 2), (-4, -2), (-4, 0)$



What are the co-ordinates of the new shape? $(2, 2), (0, -5), (4, -5)$



What are the co-ordinates of the new shape? $(-1, -3), (0, -3), (0, -1), (1, -1), (1, 0), (-1, 0)$