


RACE TO THE TOP OF THE CHART.



The top 10 best-selling digital singles in the world ... ever!

Can you put the data from this sheet in to the table below. The group that sold the most singles should be number one, down to the lowest selling at 10.



Ranking	Artist	Single	Released	Sales (millions)
1	The Black Eyed Peas	"I Gotta Feeling"	2009	15
2	Adele	"Rolling in the Deep"	2010	14
3	The Black Eyed Peas	"Boom Boom Pow"	2009	11
4	Bruno Mars	"Just the Way You Are"	2010	13
5	Bruno Mars	"Grenade"	2010	10
6	Carly Rae Jepsen	"Call Me Maybe"	2011	9
7	Eminem featuring Rihanna	"Love the Way You Lie"	2010	6
8	Flo Rida featuring T-Pain	"Low"	2007	12
9	Gotye featuring Kimbra	"Somebody That I Used to Know"	2011	16
10	Jason Mraz	"I'm Yours"	2008	8


Rank	Artist	Single	Year	Sales
1				
2				
3				
4				
5				
6				
7				
8				
9				
10				



80	62 ↓		NEW YORK RAINING CHARLES HAMILTON FT RITA ORA	VIRGIN	29	5
81	New				81	1
82	56 ↓		SUN IS SHINING AXWELL & INGROSSO	DEF JAM	56	2
83	89 ↑		WAVES MR PROBZ	LEFT LANE RECORDINGS	1	62
84	Re		I CAN CHANGE BRANDON FLOWERS	VERTIGO	79	2
85	95 ↑		BANG BANG JESSIE J/GRANDE/MINAJ	LAVA/REPUBLIC RECORDS	1	40

RACE TO THE TOP OF THE CHART.

My i-pod has gone wrong and I am not sure how long these songs play for. Can you look at how much has already played and work out an approximate play time for each song.



Radio Protector
65 Days of Static — One Time for All Time
2:43

How long is this song?

Neighborhood #1 (Tunnels)
Arcade Fire — Funeral
2:24

How long is this song?

Bubbles
Biffy Clyro — Only Revolutions
1:00

How long is this song?

Seventy Times 7
Brand New — Your Favourite Weapon
1:11

How long is this song?

Kickstarts
Example — Won't Go Quietly
0:30

How long is this song?

The Man Who Can't Be Moved
The Script — The Script
3:00

How long is this song?

70	74 ↑		ALL OF ME JOHN LEGEND	COLUMBIA	2	73
71	59 ↓		HEROES (WE COULD BE) ALESSO FT TOVE LO	VIRGIN	6	27
72	79 ↑					
73	63 ↓		CAN'T STOP PLAYING (MAKES ME HIGH) DR KUCHO/GREGOR SALTO/ANE BRUN	MINISTRY OF SOUND	4	11
74	65 ↓		STAY WITH ME SAM SMITH	CAPITOL	1	58
75	70 ↓		WISH YOU WERE MINE PHILIP GEORGE	3 BEAT/AATW	2	26

RACE TO THE TOP OF THE CHART.

ONE DIRECTION BY THE NUMBERS

Numbers in Words

3 Where they finished on the 2010 season of *The X Factor UK*

18.6 Average age of the five band members

4.2m Records sold

3 How many minutes it took for tickets to the band's four Australian concerts to sell out

2m The fee, in pounds, Simon Cowell's *Sycro* reportedly paid to sign the band in January 2011

1 Where their album *Up All Night* debuted on the US chart last month

13 Countries where the album is No. 1 now

224m Views of the band's Vevo channel on YouTube

1m Amount, in US dollars, American boy band One Direction, which formed in 2009, is seeking in damages for the "theft" of its name



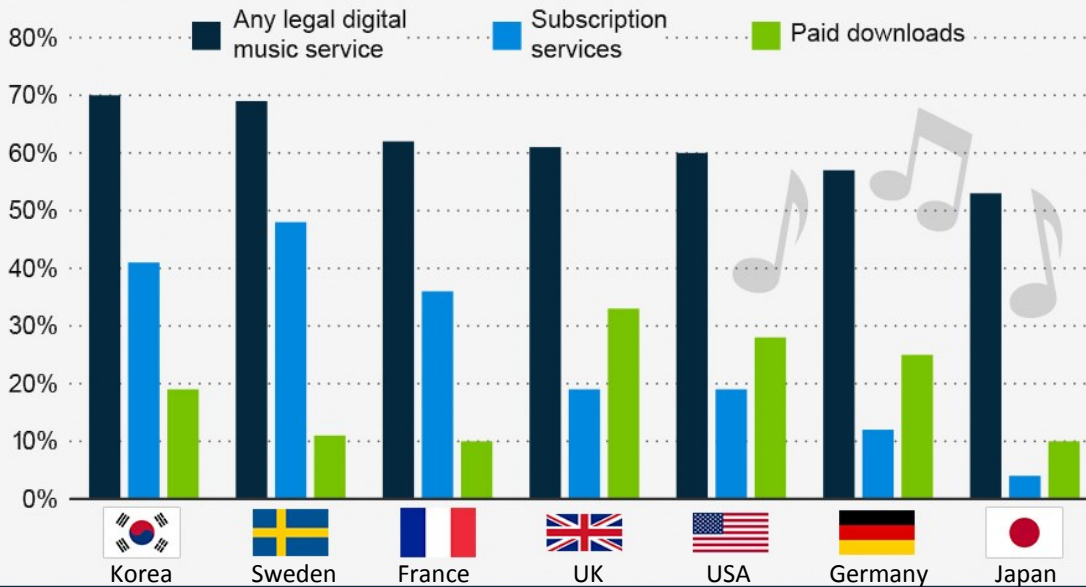
We are having a few problems with our accounts, can you write the numbers above in words please.

50				21	3
51	48 ↓		FOURFIVE SECONDS RIHANNA/KANYE WEST/MCCARTNEY	ROC NATION	3 22
52	50 ↓		SHIP TO WRECK FLORENCE & THE MACHINE	ISLAND	27 10
53	55 ↑		EARNED IT WEEKND	REPUBLIC RECORDS/XO	4 26
54	47 ↓		DEAR FUTURE HUSBAND MEGHAN TRAINOR	EPIC	20 15
55	16 ↓		PRETTY GIRLS BRITNEY SPEARS & IGGY AZALEA	RCA	16 2

RACE TO THE TOP OF THE CHART.

Digital Music Services Go Mainstream

Percentage of internet users using legal digital music services in 2012




Digital (online) sales are very important, can you use this bar chart to answer the questions about percentages?

statista The Statistics Portal

CC creative commons

Source: IFPI

1. What percentage of Japanese sales are 'paid downloads'? _____
2. What percentage of Korean sales are 'Subscription Services'? _____
3. Which two countries share the same percentage of 'paid downloads'?
_____ and _____
4. What is the difference in UK sales of 'Subscription services' and 'paid downloads'?
_____ approximately
5. What is the difference in USA sales of 'any legal digital music service' and 'subscription services'? _____ approximately.
6. What percentage of German sales are of 'any legal digital music service'? _____
7. Which country has the highest sales of digital music? _____
8. Which country has the lowest sales of digital music? _____
9. Do you think that the percentages have gone lower or higher in 2015? _____
Why do you think this is? _____



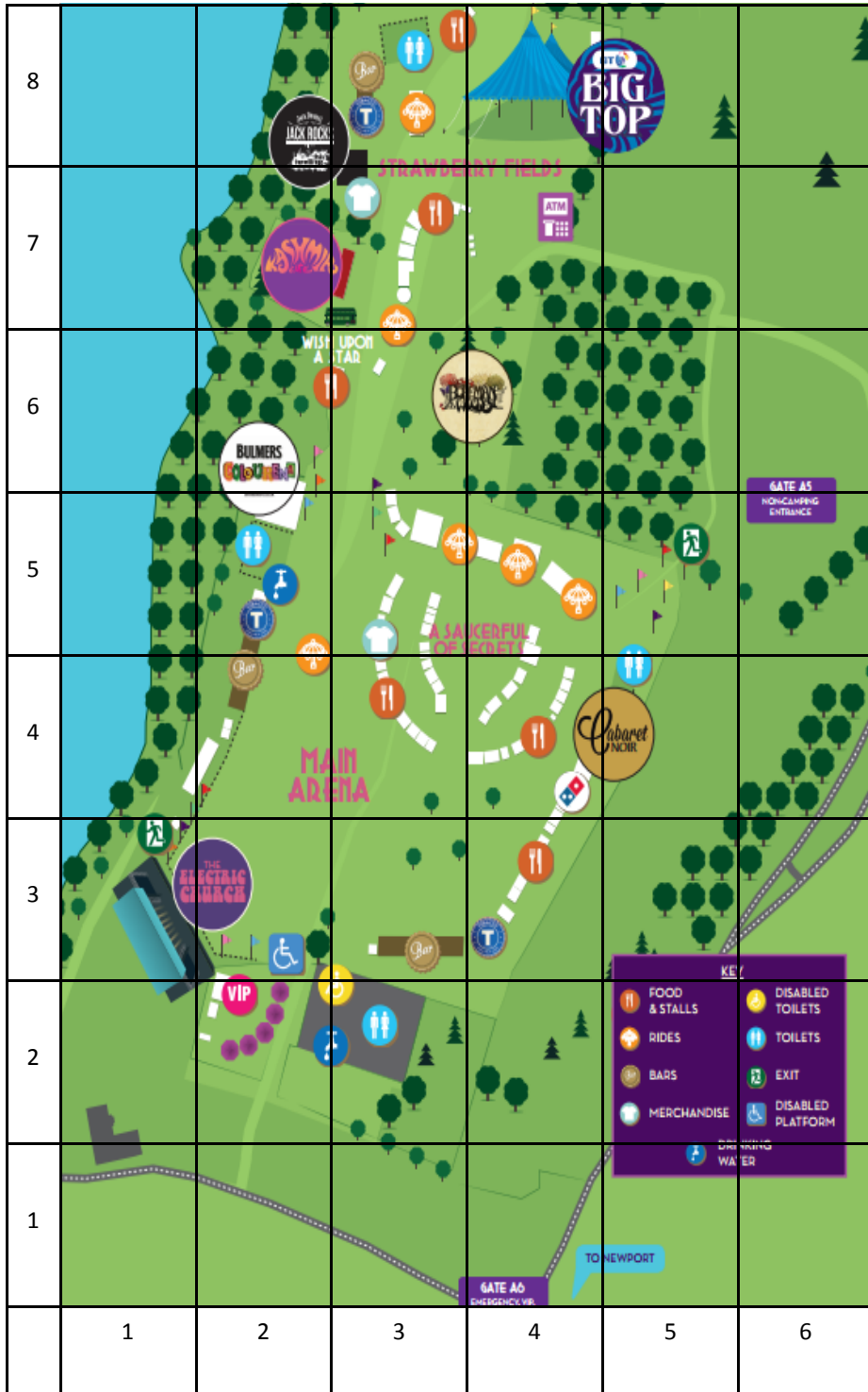
Don't forget to use the percentage sign %

Congratulations you have now reached the top 40. Brilliant !!!!




40					5
41	43 ↑		WAITING FOR LOVE AVICII	POSITIVA/PRMD	41 5
42	36 ↓		TALKING BODY TOVE LO	UMC	17 9
43	40 ↓		TROUBLE IGGY AZALEA FT JENNIFER HUDSON	EMI	7 16
44	42 ↓		THE NIGHTS AVICII	POSITIVA/PRMD	6 24
45	39 ↓		G.D.F.R. FLO RIDA FT SAGE THE GEMINI	ATLANTIC	3 16

RACE TO THE TOP OF THE CHART.



I love a good festival and there is non better than the Isle of Wight festival. Can you use your knowledge of co-ordinates to answer the questions.



1. What co-ordinates are the toilets at?

2. Where is the main stage?

3. I am at the main arena and want to get to the big top, using co-ordinates how will I get there?





4. Where will I find the exits?

5. How many food stalls are there? _____

20	:				6
21	18 ↓		UPTOWN FUNK MARK RONSON FT BRUNO MARS	COLUMBIA	1 29
22	20 ↓		SUGAR MAROON 5	INTERSCOPE	7 23
23	19 ↓		FIRESTONE KYGO FT CONRAD SEWELL	EPIC	8 25
24	17 ↓		DON'T LOOK DOWN MARTIN GARRIX FT USHER	RCA/SPINNIN	9 5
25	26 ↑		HOLD BACK THE RIVER JAMES BAY	VIRGIN	2 31






6. I am at Dominoes Pizza but have run out of money. Using co-ordinates how do I get to the cashpoint? (ATM)

RACE TO THE TOP OF THE CHART.

Question	Aha	Depeche Mode	Frankie Goes To Hollywood	Madness
Picture:				
Number of singles:	12	23	7	19
Singles' chart positions:	2, 1, 8, 5, 8, 5, 13, 5, 5, 25, 11, 13	57, 11, 8, 6, 12, 18, 13, 6, 21, 4, 9, 16, 18, 18, 15, 28, 17, 16, 22, 21, 60, 22, 13	1, 1, 1, 2, 4, 19, 28	3, 4, 7, 4, 7, 4, 14, 1, 4, 5, 8, 2, 5, 11, 17, 18, 21, 35, 18
Number of albums:	3	7	2	5
Albums' chart positions:	2, 2, 2	10, 8, 6, 5, 4, 10, 5	1, 5	2, 5, 10, 6, 16
Compilation albums:	-	1	-	2
Chart position:	-	6	-	1, 29
Approximate worldwide sales (up to 2015) to the nearest million:	80,000,000	100,000,000	40,000,000	75,000,000
Years they released material:	1985, 1986, 1987, 1988	1981, 1982, 1983, 1984, 1985, 1986, 1987, 1988, 1989	1983, 1984, 1985, 1986, 1987	1980, 1981, 1982, 1983, 1984, 1985, 1986

Using the information above can you create 10 word problems.

E.g. How many albums did Madness release?

10				4	7
11	7 ↓		WHERE ARE U NOW SKRILLEX & DIPO/JUSTIN BIEBER	ATLANTIC	3 16
12	10 ↓		SEE YOU AGAIN WIZ KHALIFA FT CHARLIE PUTH	ATLANTIC	1 12
13	9 ↓		HEY MAMA DAVID GUETTA/N MINAJ/AFROJACK	PARLOPHONE	9 10
14	12 ↓		BILLS LUNCHMONEY LEWIS	KEMOSABE/RCA	2 7
15	22 ↑		PHOTOGRAPH ED SHEERAN	ASYLUM	15 32

RACE TO THE TOP OF THE CHART

ORANGE STAGE	BLUE STAGE	GREEN STAGE	CONVERSE ESSENTIAL STAGE	smokefree LOCAL PRODUCE	BOILER ROOM	LILYWORLD	SILENT DISCO
		HEADLESS CHICKENS 10.30PM - 11.20PM		B. R. SOUND & VIDEO DELAY 10.00PM - CLOSE	THE PRODIGY 10.15PM - 11.30PM		SILENT DISCO FEATURING DJ OD AND DJ STEVEN GUTS
	NEIL YOUNG 9.10PM - 10.40PM	DROPKICK MURPHYS 8.45PM - 9.35PM	FANTOMAS 9.35PM - 10.30PM	CORNERSTONE ROOTS 9.00PM - 10.00PM	PEE WEE 9.30PM - 10.15PM	SUPERSTAR DJs	SILENT DISCO 8.00PM - 10.00PM
ARCTIC MONKEYS 8.00PM - 9.00PM			WETA 8.00PM - 8.45PM	HORSEMEN FAMILY 8.00PM - 8.45PM	HOT CHIP 8.30PM - 9.30PM	MIKEY HAVOC 8.15PM - 9.00PM	SILENT DISCO 7.00PM - 8.00PM
	THE LIVING END 7.00PM - 8.00PM	THE BLACK SEEDS 7.15PM - 8.00PM		ETHICAL 7.15PM - 7.45PM	HOLY GHOST 7.30PM - 8.30PM		DICK "MAGIK" JOHNSON AND SILENT DISCO 7.00PM - 8.00PM
			THE MINT CHICKS 6.30PM - 7.15PM	KOLAB 6.30PM - 7.00PM	SIMIEN MOBILE DISCO 6.30PM - 7.30PM	CYNICAL BROTHERS 6.45PM - 8.15PM	
SERJ TANKIAN 6.00PM - 6.55PM		MY MORNING JACKET 5.30PM - 6.30PM		THE TRONS 5.45PM - 6.15PM	ZANE LOWE 5.30PM - 6.30PM	SON OF DAVE 6.00PM - 6.45PM	D.FORM AND SILENT DISCO 6.00PM - 7.00PM
	THE DATSUNS 5.00PM - 5.55PM		SNEAKY SOUND SYSTEM 4.45PM - 5.30PM	HONEY CLAWS 5.00PM - 5.30PM		HOT AFRO GO-GO	MANUEL BUNDI AND SILENT DISCO 5.00PM - 6.00PM
TV ON THE RADIO 4.10PM - 5.00PM		NESIAN MYSTIK 4.00PM - 4.45PM		THE DHD'D'S 4.15PM - 4.45PM	LUPE FIASCO 4.30PM - 5.30PM	DJ MILES CLERET 4.15PM - 5.30PM	JIMMY CHRISTMAS AND SILENT DISCO 4.00PM - 5.00PM
	PENDULUM 3.20PM - 4.10PM		LADI 6 3.15PM - 4.00PM	SIDEKICKNICK 3.30PM - 4.00PM	Z*TRIP 3.30PM - 4.30PM	CYNICAL BROTHERS	SOUNDS OF THE OVERGROUND AND SILENT DISCO 3.00PM - 4.00PM
BULLET FOR MY VALENTINE 2.30PM - 3.20PM		THE TING TINGS 2.30PM - 3.15PM		THE MOTS 2.45PM - 3.15PM	TIKI TAANE 2.45PM - 3.30PM	SHEBA 2.45PM - 3.15PM	
				GEORGE & QUEEN 2.00PM - 2.30PM	P-MONEY 2.00PM - 2.45PM		
	ELEMENO P 1.45PM - 2.30PM		LUGER BOA 1.45PM - 2.30PM	THE TRONS 1.45PM - 2.00PM		TURNAROUND CREW 1.45PM - 2.45PM	THE KINGSLAND VINYL APPRECIATION SOCIETY AND SILENT DISCO 2.00PM - 3.00PM
BLACK KIDS 1.00PM - 1.45PM		THE TUTTS 1.00PM - 1.45PM		BRAND NEW MATH 1.15PM - 1.45PM	STATE OF MIND 1.15PM - 2.00PM	RISENGA'S BUSH TECHNOLOGY 1.00PM - 1.45PM	
	COBRA KHAN 12.15PM - 1.00PM		THE NAKED AND FAMOUS 12.15PM - 1.00PM	JUST ONE FIX 12.30PM - 1.00PM	ANTIFORM 12.30PM - 1.15PM	THE WELLINGTON INTERNATIONAL UKULELE ORCHESTRA 12.15PM - 12.45PM	
SUBTRACT 11.30AM - 12.15PM		AUTOZAMM 11.30AM - 12.15PM	CLAP CLAP RIOT 11.00AM - 11.30AM	WORLD WAR FOUR 11.45AM - 12.15PM	AN EMERALD CITY 11.45AM - 12.30PM	HELLO BUDDYWORLD!	SILENT DISCO 12.00NOON - 2.00PM
		BIONIC PIXIE 10.30AM - 11.00AM		BANG BANG ECHE 11.00AM - 11.30AM	QUAY STREET SOCIAL CLUB 11.00AM - 11.45AM		

You are almost there, your hard work is paying off and you are almost top of the charts. Just a little more promotion work and you will be there. Look at the timetable above and use it to answer the questions below:



- On what stage and at what time is Neil Young playing? _____
- How long are the 'Arctic Monkeys' playing for? _____
- I want to watch 'Brand New Math' then watch 'The Ting-Tings', how long have I got to get to the 'Ting-Tings'? _____
- How long are the 'Mint Chicks' playing for? _____
- I have just finished watching 'Hot Chip' how long do I have to wait until 'The Prodigy' are on stage?

- If the festival opens at 10:30am and closes at 23:30 how long is the festival open for? _____
- Which act is the first to perform in the festival?

5					17
6	3 ↓		CHEERLEADER (FELIX JAEHN REMIX) OMI	ULTRA RECORDS	1 25
7	New		I DON'T LIKE IT I LOVE IT FLO RIDA FT THICKE & WHITE	ATLANTIC	7 1
8	8		TRAP QUEEN FETTY WAP	300 ENTERTAINMENT	8 12
9	4 ↓		FIVE MORE HOURS DEORRO & CHRIS BROWN	RELENTLESS	4 7
10	6 ↓		RUNAWAY (U & I) GALANTIS	BIG BEAT	4 7