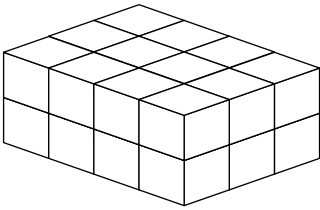


Volume of Cuboids

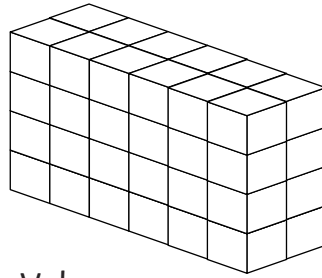
Find the volume of these cuboids.

1.



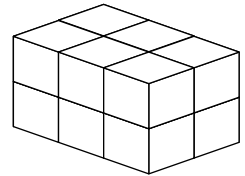
Volume:

2.



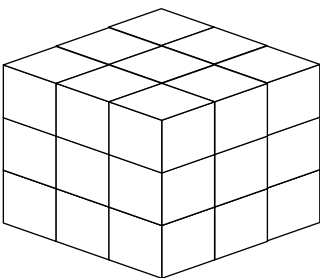
Volume:

3.



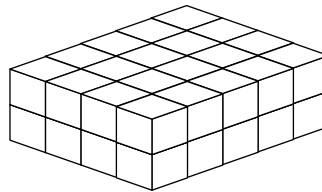
Volume:

4.



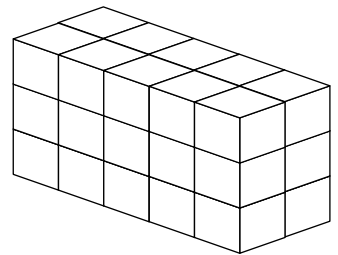
Volume:

5.



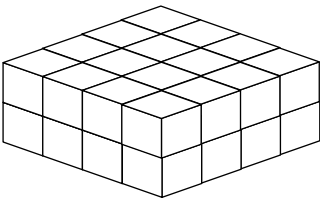
Volume:

6.



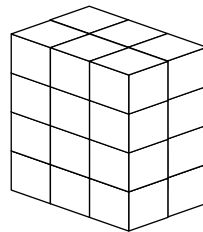
Volume:

7.



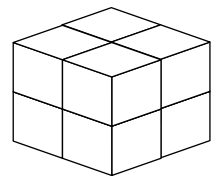
Volume:

8.



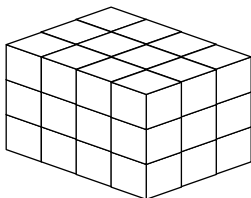
Volume:

9.



Volume:

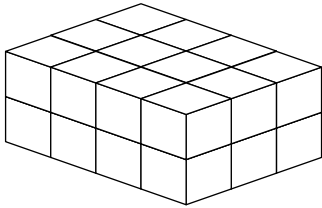
10.



Volume:

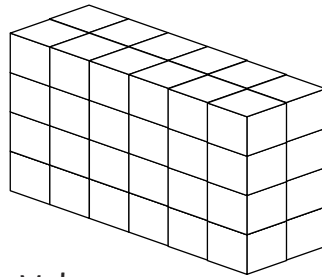
Volume of Cuboids Answers

1.



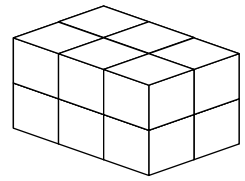
Volume:
24 cubic units

2.



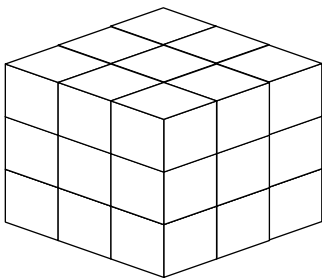
Volume:
48 cubic units

3.




Volume:
12 cubic units

4.



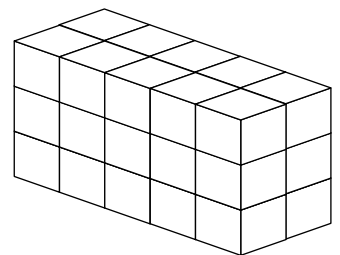
Volume:
27 cubic units

5.



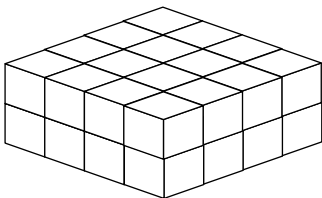
Volume:
40 cubic units

6.



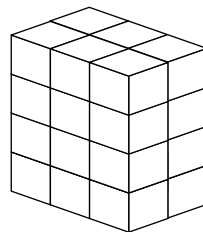
Volume:
30 cubic units

7.



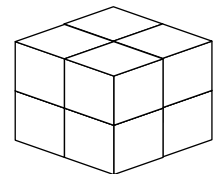
Volume:
32 cubic units

8.



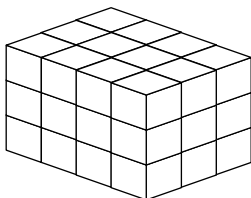
Volume:
24 cubic units

9.



Volume:
8 cubic units

10.



Volume:
36 cubic units